



## SARASAS AFFILIATED SCHOOL

Liveworksheets

Bilingual Program

2<sup>nd</sup> Semester

Subject: Mathematics

Grade 1

















Feb. 14-18, 2022

First Name: \_\_\_\_\_ Last name: \_\_\_\_\_ Grade: \_\_\_\_ No. \_\_\_\_

### Activity: Pictogram

**Direction: Choose the letter of the correct answer.**

#### Favorite sports of students

			
			
			
			
			
			
Tennis	Soccer	Volleyball	Basketball

**1. How many students choose soccer?**

a. 4

b. 6

c. 2

**2. Which sport do most students choose?**

a. Soccer

b. Tennis

c. Basketball

**3. Which sport do less students choose?**

- a. Tennis                      b. Volleyball              c. Soccer**

**4. Which two sports are chosen by the same number of students?**

- a. Soccer and Volleyball  
b. Tennis and Basketball  
c. Basketball and Soccer**