













**3** Add together each group of fractions.

- a)  +  + 
- b)  +  + 
- c)  +  + 
- d)  +  + 

**4** Read and answer these.

a) What is  $6\frac{3}{8}$  less than  $9\frac{4}{5}$ ?

b) Subtract  $3\frac{7}{10}$  from  $6\frac{7}{15}$ .

c) What is the difference between  $12\frac{3}{5}$  and  $8\frac{7}{8}$ ?

d) What is the  $12\frac{7}{18}$  take away  $9\frac{11}{12}$ ?

e) What is  $11\frac{7}{20}$  subtract  $8\frac{1}{12}$ ?

f) What is the difference between  $15\frac{2}{25}$  and  $12\frac{2}{10}$ ?