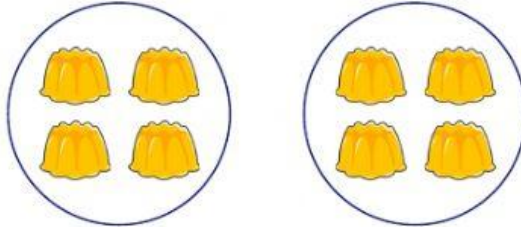


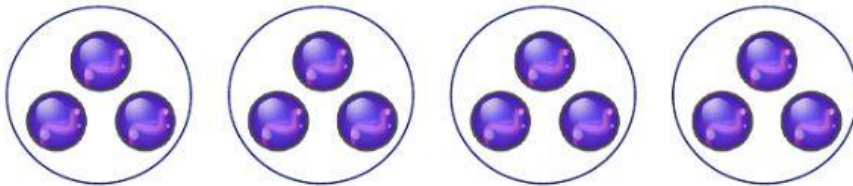
Introduction to Division (A)

Use the model to fill in the missing number in the sentences.




_____ jellies are divided equally into _____ groups.

There are _____ jellies in each group.



_____ marbles are divided equally into _____ groups.

There are _____ marbles in each group.



_____ boats are divided equally into _____ groups.

There are _____ boats in each group.