

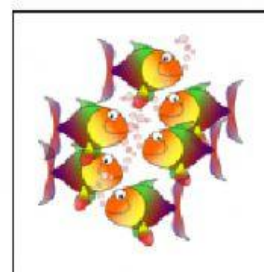
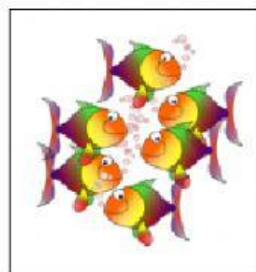
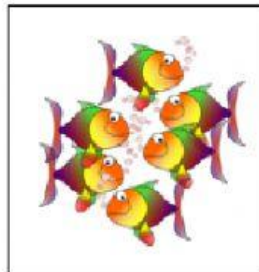

Name: _____

Date: _____

Activity 1: Multiplying Group of Equal Numbers

Study each group of pictures. Then write in each box the correct number or word being asked for.

1.


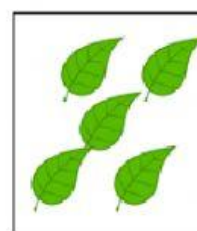

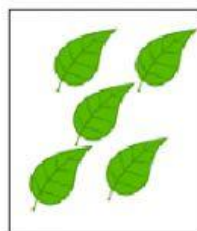
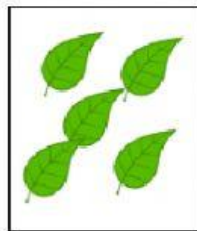


Four groups of =

four 6s =

what is the product?

2.



5 groups of =

five 5s =

what is the product?

3.



three groups of =

three 6s =

what is the product?