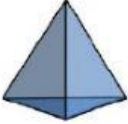
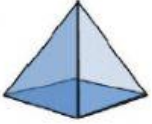
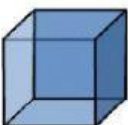

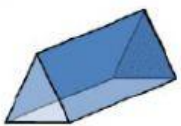
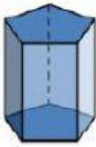


Q.1

Fill in the following table.

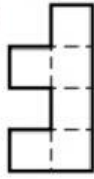
Shape	Name	Number of Faces	Number of Edges	Number of Vertices
	Triangular Pyramid			
	Square Pyramid			
	Cube			
	Cuboid			
	Triangular Prism			
	Pentagonal Prism			

Q.2

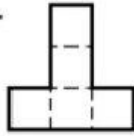
1. Which figure forms a net for a cube?



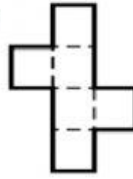
a.



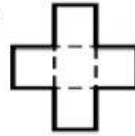
b.



c.




d.



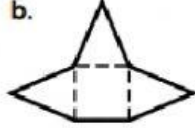
2. Which figure forms a net for a rectangular pyramid?



a.



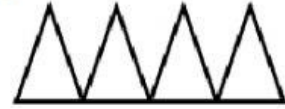
b.



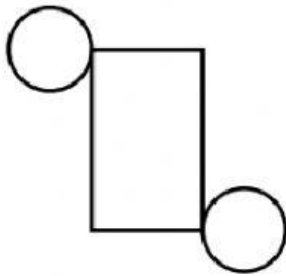
c.



d.



3. Which solid shape is made by the net pictured below?




a.



sphere

b.



rectangle
prism

c.



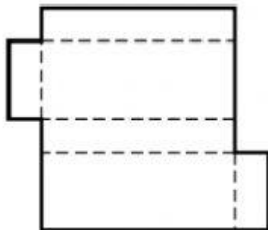
cone

d.



cylinder

4. Which solid shape is made by the net pictured below?



a.



cube

b.



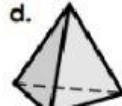
rectangular
prism

c.



cylinder

d.



triangular
pyramid