


Name :	Score :
Class :	
Day & date :	Parent signature :
Grade / Semester : 2 / 2	Subject : Math Topic : Dividing by 3 and 4

*Bismillahirrahmanirrahim*

A. Make the groups by circling the items, then fill in the blanks.

1.



$$18 \div 3 =$$

2.



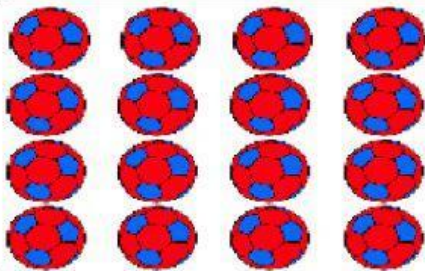
$$20 \div 4 =$$

3.



$$9 \div 3 =$$

4.




$$16 \div 4 =$$

**B. Read the questions carefully. Then, answer the questions correctly.**

1. Arsyi has 24 coconuts.

She puts the coconuts into 3 boxes.


How many coconuts does she put into each box?



2. Khelly has 32 lollipops.

He divides the lollipops into 4 groups equally.


How many lollipops in each of the group?



3. Keysha had 18 flowers.

She wants to put 3 flowers in each vase.

How many vases did Keysha need?



*Alhamdulillahirabbil 'alamin*