



Sarasas Witaed Nimitmai School
Second Semester Academic Year 2021-2022
Mathematics Grade 1
Quiz

Name: _____ Surname: _____ Class: _____ No. _____

Part 1: Multiple Choice

5 points


Directions: Write the letter of the correct answer.

___ 1. What figure is this? ○

a. circle

b. square

c. triangle

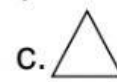
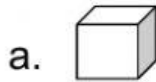
___ 2. What figure is this? 

a. triangle

b. rectangle

c. oval

___ 3. Which figure has two dimensions or 2D shape?



___ 4. What shape is a ball?

a. sphere

b. cylinder

c. cube

___ 5. Which is a plain figure?

a. cone

b. oval

c. cylinder

Part 2: True or False

5 points

Directions: Write **T** if the statement is **true** and **F** if it is **false**.

___ 1. An oval is a plain figure.

___ 2. A quadrilateral has four sides and four angles.

___ 3. A circle has four sides.

___ 4. A square is a solid figure or 3D shape.

___ 5. Figures are shapes.

Prepared by: Ms. Arlene Checked by: Ms. Yupaporn