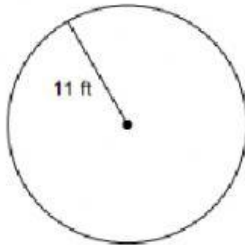


FORMATIVE ACTIVITY
CIRCUMFERENCE

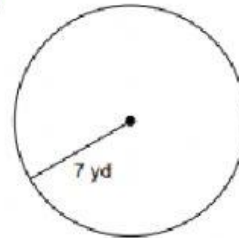
Name: _____

Use the formula $C = \pi \times \text{Diameter}$

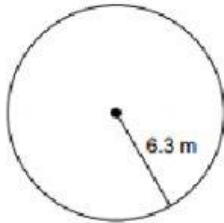
1)



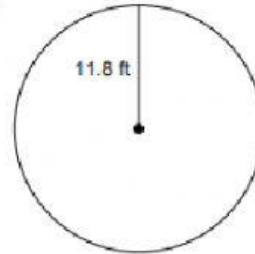
2)



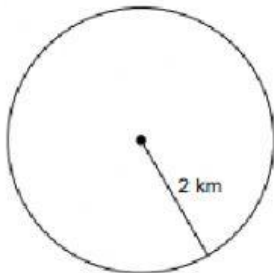
3)



4)



5)



6)

