

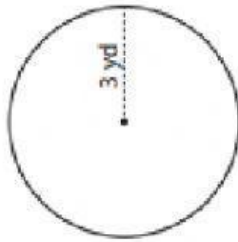
Name: _____

Level: _____

Radius and Diameter

Find the radius and diameter of each circle.

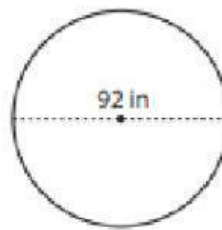
1)



Radius = _____

Diameter = _____

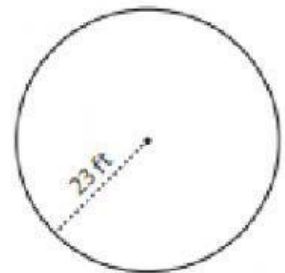
2)



Radius = _____

Diameter = _____

3)



Radius = _____

Diameter = _____

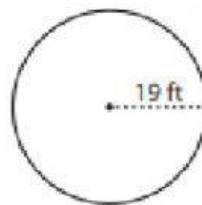
4)



Radius = _____

Diameter = _____

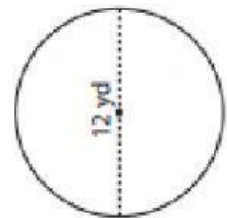
5)



Radius = _____

Diameter = _____

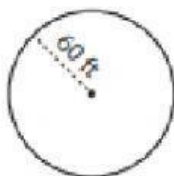
6)



Radius = _____

Diameter = _____

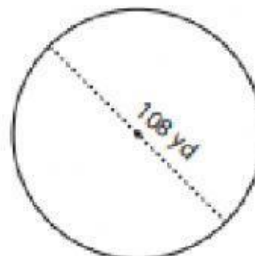
7)



Radius = _____

Diameter = _____

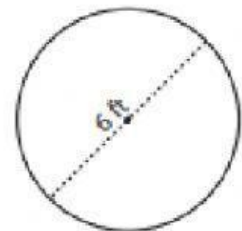
8)



Radius = _____

Diameter = _____

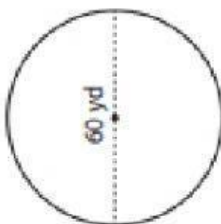
9)



Radius = _____

Diameter = _____

10)



Radius = _____

Diameter = _____