

Name: \_\_\_\_\_

Date: \_\_\_\_\_

**Learning Objective:** Look for a pattern to complete a number series**Steps To Success:**

1. Look at number with partner
2. How many count on or count back until reach next number?
3. Use the same number of counts for the next number.

**Example:****COUNT ON BY 5s**

YEAR 3

4126, 4131, 4136, 4141, 4146, 5090

**COUNT BACK BY 10s**

5170, 5160, 5150, 5140, 5130, 5120

1. Find the missing numbers.

a) Count back in 1s from 7773 to 7765.

7773								7765
------	--	--	--	--	--	--	--	------

b) Count on in 10s from 3190 to 3110.

3190								3110
------	--	--	--	--	--	--	--	------

c) Count on in 2s from 5080 to 5090

5080					5090
------	--	--	--	--	------

d) Count back in 5s from 8875 to 8850

8875					8850
------	--	--	--	--	------

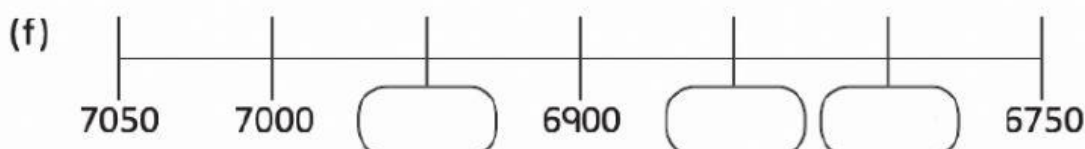
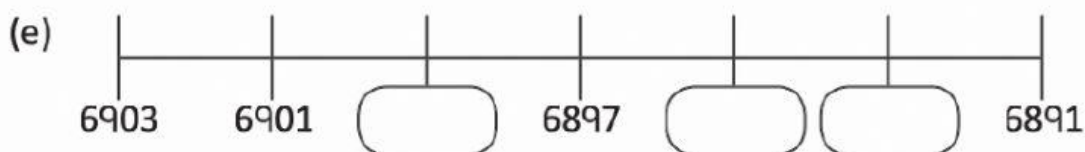
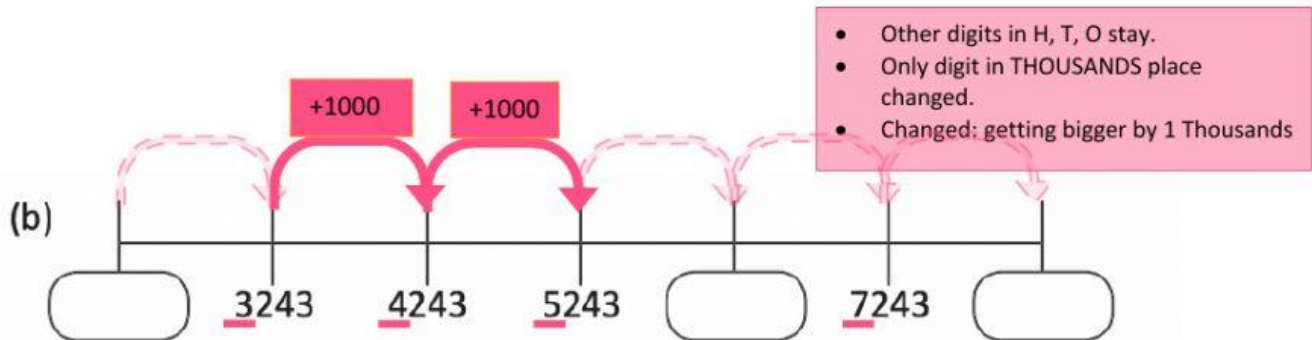
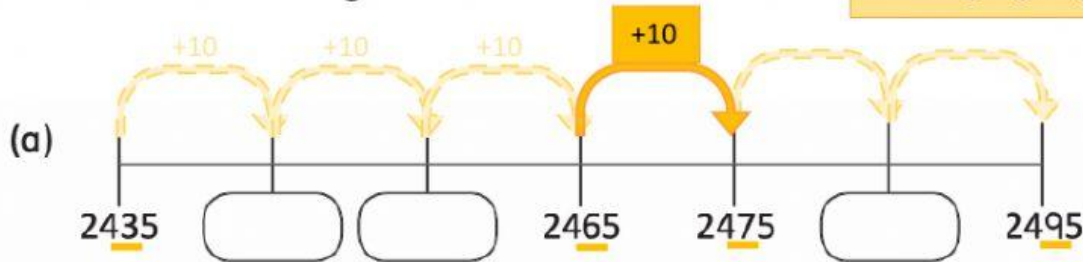
e) Count on in 50s from 4723 to 4973.

4723					4973
------	--	--	--	--	------

Hidayah Ali 2022

## 2. Fill in the missing numbers.

- Other digits in Th, H, O stay.
- Only digit in TENS place changed.
- Changed: getting bigger by 1 tens



How was today's lesson?



Hidayah A/2022

