



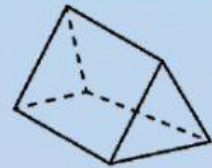

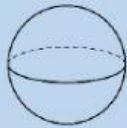
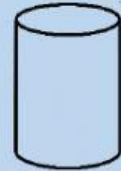
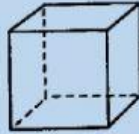
# SARASAS PITTAYA SCHOOL

## Grade 5 Mathematics



Name: \_\_\_\_\_ Student No. \_\_\_\_\_

### A. Identify the name of the following solid figures.



Rectangular prism

Cone

Cylinder

Triangular prism

Sphere

Cube

### B. Identify the shape of the following objects.



Cone

Cylinder

Rectangular prism

Sphere

Cube

Triangular prism