


Name \_\_\_\_\_

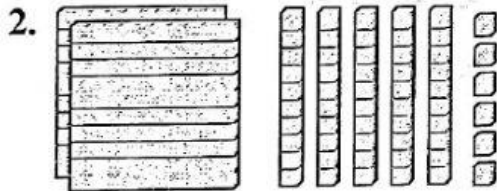
Quiz #1

Lesson 2 and 3

Write how many hundreds, tens, and ones.  
Then write the number.



\_\_\_\_\_ hundreds \_\_\_\_\_ tens \_\_\_\_\_ ones \_\_\_\_\_



\_\_\_\_\_ hundreds \_\_\_\_\_ tens \_\_\_\_\_ ones \_\_\_\_\_

Write each number in expanded form.  
Then write the number.

3. 3 hundreds 5 tens 4 ones

$$\underline{\quad} + \underline{\quad} + \underline{\quad} = \underline{\quad}$$

4. 2 hundreds 9 tens 6 ones

$$\underline{\quad} + \underline{\quad} + \underline{\quad} = \underline{\quad}$$

5. Makenna is writing that there are 365 days in a year.

How can she show this number in expanded form?

$$\underline{\quad} + \underline{\quad} + \underline{\quad} = \underline{\quad}$$

Name \_\_\_\_\_

# Expanded Form

## Learn

**What Can I Do?**  
I want to show the expanded form of a number.

| hundreds | tens | ones |
|----------|------|------|
| 3        | 0    | 7    |

$$300 + 0 + 7$$

hundreds      tens      ones

## Try It

 Write each number in expanded form.

1.  $208 =$  \_\_\_\_\_  $+$  \_\_\_\_\_  $+$  \_\_\_\_\_  
                   hundreds      tens      ones

---

2.  $422 =$  \_\_\_\_\_  $+$  \_\_\_\_\_  $+$  \_\_\_\_\_  
                   hundreds      tens      ones

---

3.  $320 =$  \_\_\_\_\_  $+$  \_\_\_\_\_  $+$  \_\_\_\_\_  
                   hundreds      tens      ones

## Power Practice

 Write each number in expanded form.

4.  $437 =$  \_\_\_\_\_  $+$  \_\_\_\_\_  $+$  \_\_\_\_\_

---

5.  $654 =$  \_\_\_\_\_  $+$  \_\_\_\_\_  $+$  \_\_\_\_\_

---


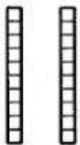

6.  $834 =$  \_\_\_\_\_  $+$  \_\_\_\_\_  $+$  \_\_\_\_\_

---

Name \_\_\_\_\_

*Hundreds, Tens, and Ones*

You can use pictures to represent hundreds, tens, and ones.

|     |   |   |   |
|-----|---|---|---|
| 126 | 1 hundred   | 2 tens  | 6 ones  |
|     |  |  |  |

Write and draw how many hundreds, tens, and ones.

1. 192

|                  |            |            |
|------------------|------------|------------|
| _____ hundred(s) | _____ tens | _____ ones |
|                  |            |            |

2. 267

|                  |            |            |
|------------------|------------|------------|
| _____ hundred(s) | _____ tens | _____ ones |
|                  |            |            |

3. 478

|               |            |            |
|---------------|------------|------------|
| _____ hundred | _____ tens | _____ ones |
|               |            |            |