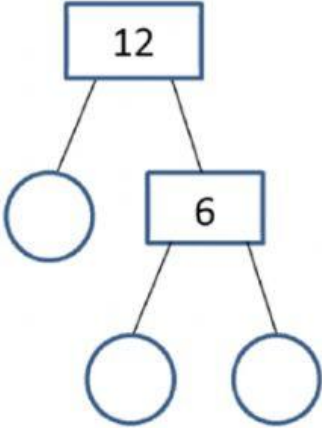
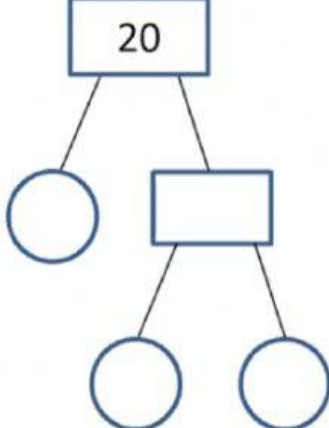
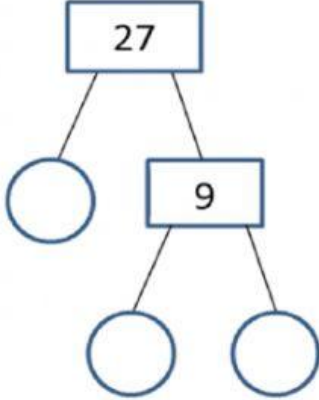
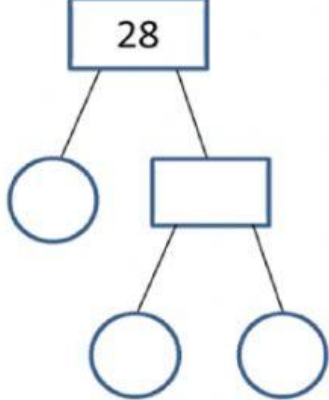
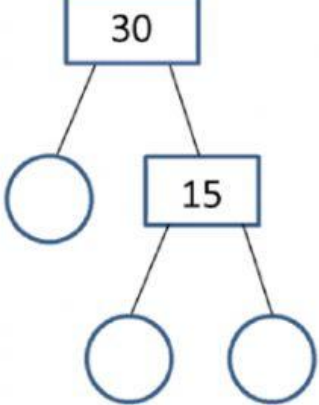
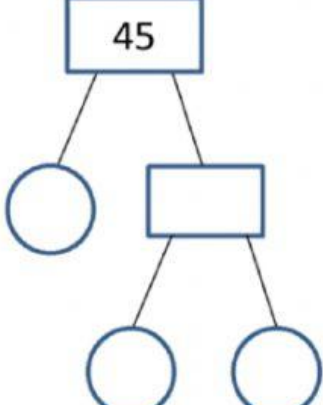


NAME : _____

DATE : _____

PRIME FACTORISATION (FACTOR TREE)

Express the following as product of its prime factors :

<p>1)</p>  <p>$12 = _ \times _ \times _$</p>	<p>2)</p>  <p>$20 = _ \times _ \times _$</p>
<p>3)</p>  <p>$27 = _ \times _ \times _$</p>	<p>4)</p>  <p>$28 = _ \times _ \times _$</p>
<p>5)</p>  <p>$30 = _ \times _ \times _$</p>	<p>6)</p>  <p>$45 = _ \times _ \times _$</p>

$$7) 24 = \underline{\quad} \times \underline{\quad} \times \underline{\quad} \times$$

$$8) 40 = \underline{\quad} \times \underline{\quad} \times \underline{\quad} \times$$

$$9) 36 = \underline{\quad} \times \underline{\quad} \times \underline{\quad} \times$$

 x

$$10) 75 = \underline{\quad} \times \underline{\quad} \times \underline{\quad}$$