

University of Hyderabad Campus School

Class: 3











Subject: Maths

Chapter: 13

Topic: Smart Charts




1. Counting Tally marks:

Write the number shown by the tally mark in each question:





| | |
|---|--|
| 1)  | <input data-bbox="1181 548 1300 660" type="text"/> |
| 2)  | <input data-bbox="1181 694 1300 806" type="text"/> |
| 3)  | <input data-bbox="1181 840 1300 952" type="text"/> |
| 4)  | <input data-bbox="1181 985 1300 1097" type="text"/> |
| 5)  | <input data-bbox="1181 1142 1300 1254" type="text"/> |
| 6)  | <input data-bbox="1181 1288 1300 1400" type="text"/> |
| 7)  | <input data-bbox="1181 1433 1300 1545" type="text"/> |
| 8)  | <input data-bbox="1181 1579 1300 1691" type="text"/> |
| 9)  | <input data-bbox="1181 1724 1300 1836" type="text"/> |
| 10)  | <input data-bbox="1181 1870 1300 1982" type="text"/> |

2. Observe the table and answer the following:

1. How many students chose cats? _____
2. How many students chose dogs? _____
3. How many students chose birds? _____
4. Which animal was the most favorite? _____
5. Which animal was the least favorite? _____

| Animals | Tally Marks |
|--|-------------|
|  | |
|  | |
|  | |

3. Observe the table and answer the following:

| Food Items | Tally Marks | In number |
|---|-------------|-----------|
|  Burger | | |
|  Pizza | | |
|  Fried Chicken | | |
|  Hot Dog | | |

1. How many burgers were sold? _____
2. Which item was sold the most? _____
3. How many more fried chickens were sold than hot dogs?

4. Which item was sold the least? _____
5. How many items were sold in all? _____