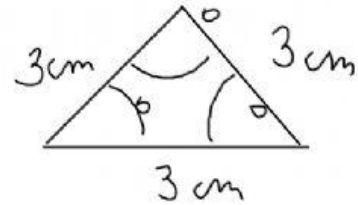
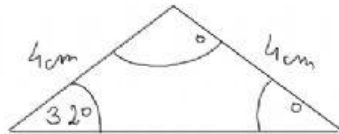
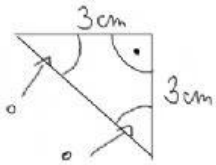

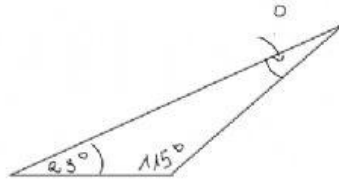
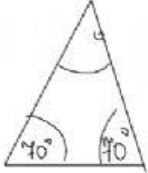
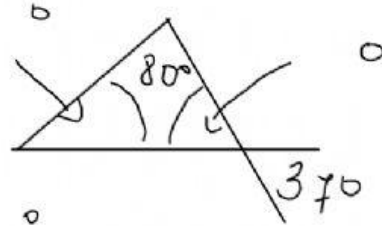
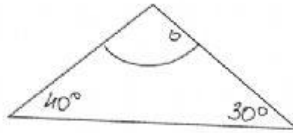
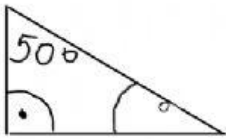


Imię i nazwisko _____

Oblicz i wpisz brakujące miary kątów w trójkątach.



Czy kąty w trójkącie mogą mieć podane miary? Wpisz "TAK" lub "NIE"

a) $90^\circ, 40^\circ, 60^\circ$ _____

b) $15^\circ, 5^\circ, 160^\circ$ _____

c) $1^\circ, 1^\circ, 178^\circ$ _____