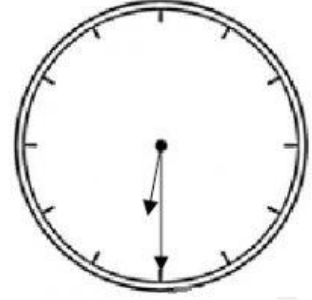
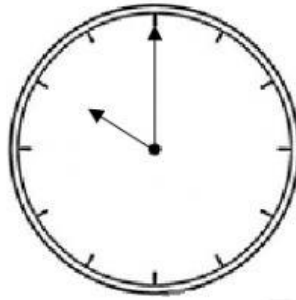
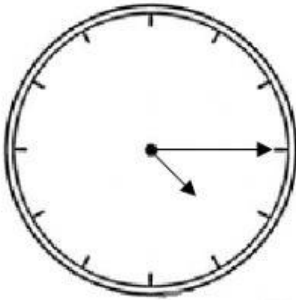


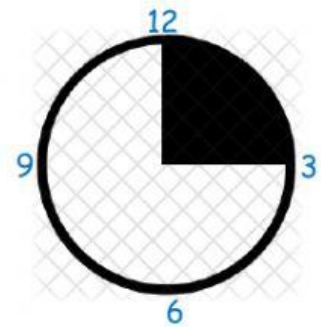
Clock 2

Q1. Look at the clock with missing numbers and write the time.



Q2. The shaded portion of the clock shows the movement of the minutes hand. If the hours hand is just ahead of 2, what is the time?

Ans.



Q3. Fill in the blanks.

a. Two quarters of an hour make _____.


b. Two halves of an hour make an _____.

Q4. These clocks have only the hours hand. Can you tell the time that they are showing?



Time: _____

Reason: _____



Time: _____

Reason: _____



Q5. Based on the above picture create your own story sum for Elapsed time and solve it too.

My Question:

My Answer:
