


# Pukul berapa?


What is the time?

1




A round analog clock with a black frame and white face. The hour hand is between 1 and 2, and the minute hand is pointing at 6. The red second hand is pointing at 12.

2




A round analog clock with a black frame and white face. The hour hand is pointing at 4, and the minute hand is pointing at 12. The red second hand is pointing at 12.

3




A round analog clock with a black frame and white face. The hour hand is pointing at 3, and the minute hand is pointing at 12. The red second hand is pointing at 12.

4




A round analog clock with a black frame and white face. The hour hand is pointing at 4, and the minute hand is pointing at 12. The red second hand is pointing at 12.

5



A round analog clock with a black frame and white face. The hour hand is pointing at 9, and the minute hand is pointing at 12. The red second hand is pointing at 12.

6



A round analog clock with a black frame and white face. The hour hand is between 8 and 9, and the minute hand is pointing at 6. The red second hand is pointing at 12.