

Mathematics

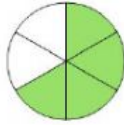
Equivalent Fractions

Directions: Answer all items to the best of your ability.

1. Which fraction is equivalent to the first fraction? Circle in the letter next to your answer. (1)



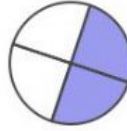
A.



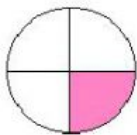
B.



C.



2. How many parts in the second fractions should be shaded to make an equivalent fraction.



(1)



3. Write the letter of fractions in the box next to its equivalent. (2)

A. $\frac{4}{10}$	B. $\frac{3}{5}$	C. $\frac{5}{25}$
-------------------	------------------	-------------------

I. $\frac{1}{5}$ _____

II. $\frac{2}{5}$ _____

4. Which numerator or denominator will make equivalent fractions? Write your answers in the boxes. (4)

I. $\frac{4}{5} = \frac{\square}{10}$

III. $\frac{15}{18} = \frac{5}{\square}$

II. $\frac{1}{2} = \frac{6}{\square}$

IV. $\frac{12}{20} = \frac{\square}{5}$

5. In a Spelling quiz Thomas got 9 out of 10 words correct. In the second quiz. His teacher assigned 20 words, and Thomas got the same grade. How many words did Thomas get right in the second quiz? (2)

Answer: _____