
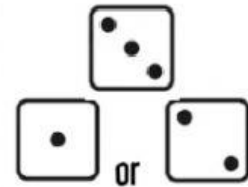
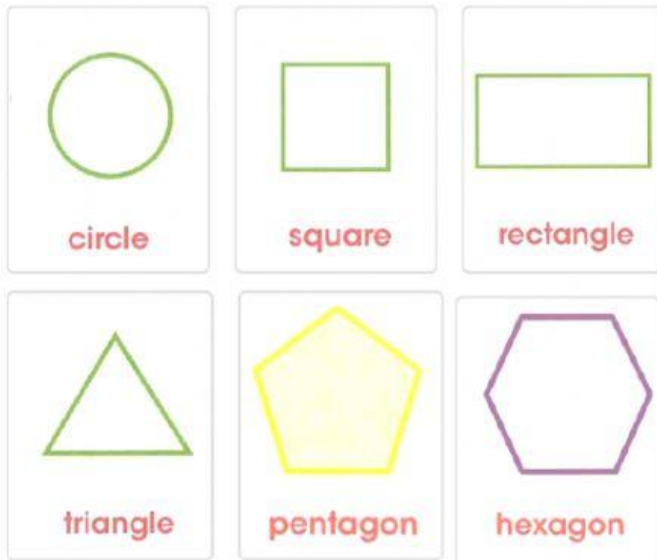




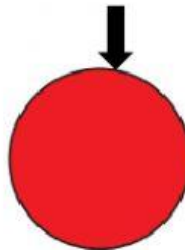
Name: _____

Date: _____

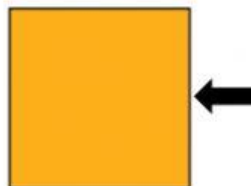
Class: _____



A circle has curved sides.







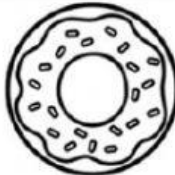


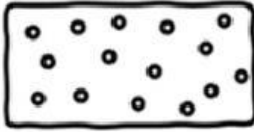
















A square has straight sides.

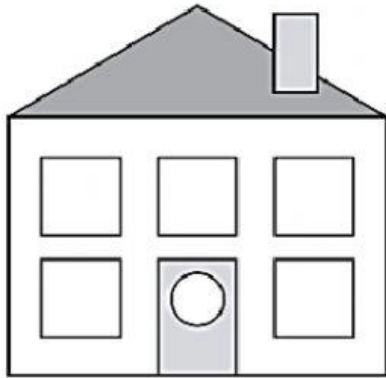




1. Tick the shapes that match their names.

Name	Shapes		
1.  rectangle	 <input type="checkbox"/>	 <input type="checkbox"/>	 <input type="checkbox"/>
2.  triangle	 <input type="checkbox"/>	 <input type="checkbox"/>	 <input type="checkbox"/>
3.  square	 <input type="checkbox"/>	 <input type="checkbox"/>	 <input type="checkbox"/>
4.  hexagon	 <input type="checkbox"/>	 <input type="checkbox"/>	 <input type="checkbox"/>
5.  pentagon	 <input type="checkbox"/>	 <input type="checkbox"/>	 <input type="checkbox"/>
6.  circle	 <input type="checkbox"/>	 <input type="checkbox"/>	 <input type="checkbox"/>

2. Count and write.



How many triangles?



How many squares?



How many rectangles?



How many circles?



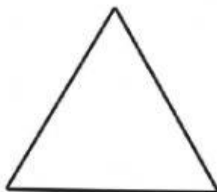
How many pentagons?



How many hexagons?




3. Read and choose.



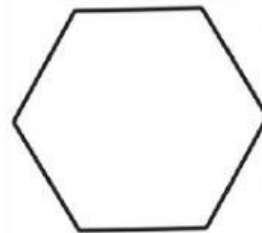
A triangle has _____ straight sides.



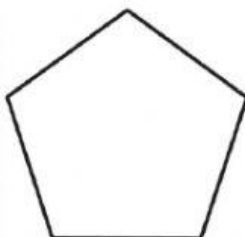
A _____ has 2 long sides and 2 short sides.



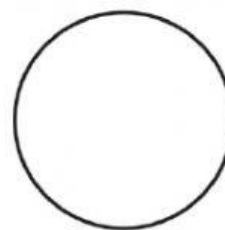
A square has _____ straight sides.



A _____ has 6 straight sides.



A pentagon has _____ straight sides.



A circle has _____ sides.

