













Use the table below to write and solve the addition number sentence

100s	10s	1s
		
		

\_\_\_\_\_ + \_\_\_\_\_ = \_\_\_\_\_

Use the table below to write and solve the addition number sentence

100s	10s	1s
		
		

\_\_\_\_\_ + \_\_\_\_\_ = \_\_\_\_\_

Decompose the numbers and solve the addition number sentences:

$545 + 373 =$
$500 + 40 + 5$ $300 + 70 + 3$
$800 + 110 + 8 = 918$

$258 + 124 =$
$\underline{\quad} + \underline{\quad} + \underline{\quad}$ $\underline{\quad} + \underline{\quad} + \underline{\quad}$
$\underline{\quad} + \underline{\quad} + \underline{\quad} = \underline{\quad}$

Decompose the numbers and solve the addition number sentences:

$545 + 373 =$
$500 + 40 + 5$ $300 + 70 + 3$
$800 + 110 + 8 = 918$

$572 + 264 =$
$\underline{\quad} + \underline{\quad} + \underline{\quad}$ $\underline{\quad} + \underline{\quad} + \underline{\quad}$
$\underline{\quad} + \underline{\quad} + \underline{\quad} = \underline{\quad}$

Solve the addition number sentences:

$36 + 42 =$

$68 + 73 =$

$32 + 49 =$

$15 + 83 =$

$51 + 70 =$

Solve the addition number sentences:

$671 + 342 =$

$256 + 452 =$

$551 + 345 + 143 =$

$345 + 273 + 174 =$