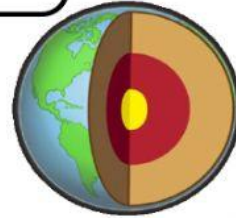
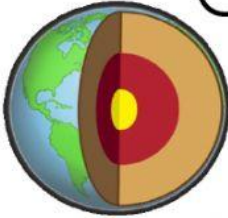


Name: _____

Date: _____

Science

Layers of the Earth



Read and answer the following questions correctly.

1. On which layer of the Earth do we live on? (1)

2. Would a human being be able to survive if he or she lived on the core of the Earth? Explain why or why not. (2)

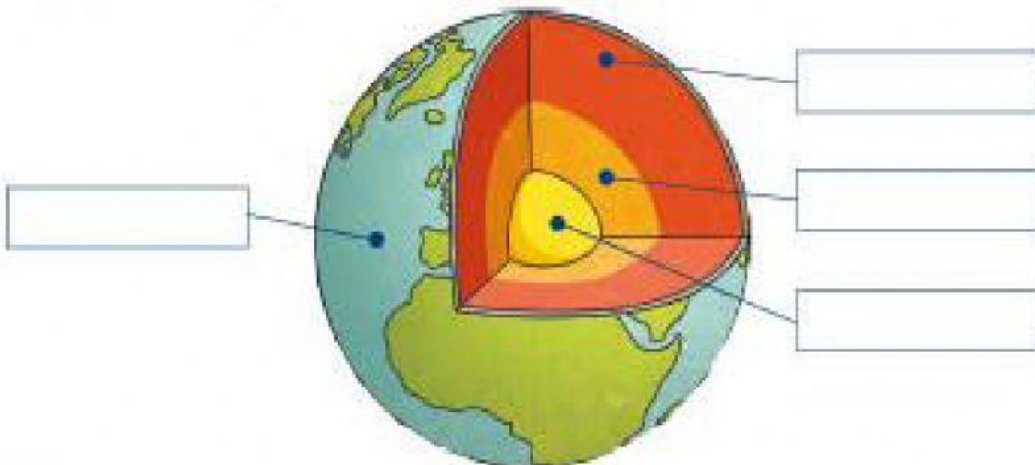
3. Use the words in the box to label the parts of the Earth.

outer core

mantle

inner core

crust



4. Write the layer of the Earth that matches each description below.

outer core

mantle

inner core

crust

a. The layer that has two parts - _____

b. The thickest layer of the Earth - _____

c. The layer that is rough and uneven - _____