

Educación Básica Media

Primer Quimestre

ESTUDIANTE: _____

PROFESOR: Lic. Samya Andrade

ASIGNATURA Math

FECHA: jueves, 27 de enero de 2022

TIEMPO: 40 min.

EXAMEN QUIMESTRAL (EQ)

No. 1

Indicaciones generales:

Please read the questions carefully.

Answer with the best option.

Review the questionnaire before answering it.

Don't forget to put your name before you start.

| CALIFICACIÓN | |
|--------------|-----------|
| 10 Puntos | |
| Curso | No. Lista |
| 2 | |



1) Solve the following additions.

$$\begin{array}{r} 5 \\ + 4 \\ \hline \end{array}$$

$$\begin{array}{r} 2 \\ + 3 \\ \hline \end{array}$$

$$\begin{array}{r} 7 \\ + 2 \\ \hline \end{array}$$

$$\begin{array}{r} 2 \\ + 5 \\ \hline \end{array}$$

2) Connect the number with the correct word.

1

Two

2

One

3

Four


4

Three

5

Five

3) Read the questions and choose the right answer.




a. What's this?

It's a rectangle.
It's a circle.
It's a diamond.

b. What color is it?

It's a red.
It's blue.
It's red.




a. What's this?

It's a rectangle.
It's a circle.
It's a triangle.

b. What color is it?

It's purple.
It's yellow.
It's a red.



a. What's this?

It's square.
It's a triangle.
It's a square.

b. What color is it?

It's yellow.
It's blue.
It's green.









4) Solve the following subtractions.

$$10 - 7 = \square$$

$$5 - 2 = \square$$

$$9 - 6 = \square$$

5) Count how many objects are there and choose the correct number.

| | | |
|---|-----------|-----------|
|  | 3 | 8 |
|  | 5 | 6 |
|  | 2 | 5 |
|  | 10 | 4 |
|  | 8 | 6 |
|  | 1 | 10 |
|  | 3 | 7 |
|  | 1 | 10 |

Elaborado por:

Samya Andrade
Techaer

Revisado por:

Comisión académica