

Area and Perimeter of Squares and Rectangles

- Questions taken from Page 81 and 84 of Textbook 4B
- Solve the sums in your math notebook and write only the answers.
- Do not use any space or comma

PRACTICE

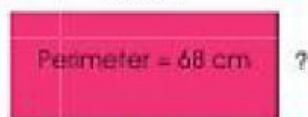


1. The perimeters of some squares are given.
Find the length of one side of each square.

Perimeter	Length
48 cm	<input type="text"/> cm
32 cm	<input type="text"/> cm
52 m	<input type="text"/> m
120 m	<input type="text"/> m

2. Find the length or breadth of each rectangle.

(a) 24 cm



Breadth = cm

(b) 40 m



Breadth = m

(c) ?



Length = cm

(d) ?



Length = m

PRACTICE



1. Find the length of each square.

(a) ?



Length = cm

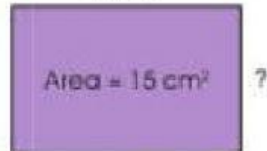
(b) ?



Length = m

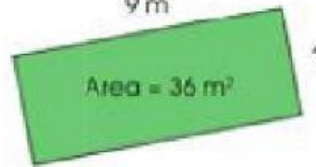
2. Find the length or breadth of each rectangle.

(a) 5 cm



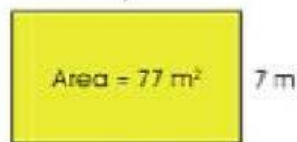
Breadth = cm

(b) 9 m



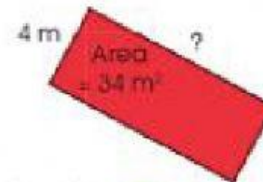
Breadth = m

(c) ?



Length = m

(d) 4 m



Length = m