

WHAT TIME IS IT?



- a. A quarter past five
- b. A quarter to five
- c. Three past five
- d. Five o'clock



- a. A half past seven
- b. A half past six
- c. A half to six
- d. Six o'clock




- a. Half past eight
- b. Four past eight
- c. Eight past four
- d. Twenty past eight



- a. Four to ten
- b. Ten past four
- c. Four past ten
- d. Ten to four



- a. Five to twelve
- b. One past one
- c. One past twelve
- d. Five past twelve



- a. A quarter to twelve
- b. Nine to twelve
- c. Twelve past nine
- d. Twelve to nine



- a. Seven past twelve
- b. Twelve past seven
- c. Twelve o'clock
- d. Seven o'clock



- a. Eight past six
- b. Six past eight
- c. Six to eight
- d. A half past eight



- a. Ten o'clock
- b. O'clock ten
- c. Twelve o'clock
- d. Ten past twelve




- a. A quarter past three
- b. A quarter past ten
- c. Ten past quarter
- d. Ten past three




- a. Twelve past one
- b. Twelve o'clock
- c. One o'clock
- d. One past twelve




- a. A quarter past nine
- b. A quarter to seven
- c. Seven past quarter
- d. Seven past nine




- a. Twenty five to six
- b. Six to seven
- c. Twenty five past seven
- d. Seven past six



- a. Twenty five to twelve
- b. One past five
- c. Five past one
- d. Twenty five past twelve



- a. Two past twelve
- b. Two o'clock
- c. Twelve o'clock
- d. Twelve to two




- a. Twenty to twelve
- b. Twenty past twelve
- c. Eight to twelve
- d. Twelve to eight




- a. Twenty past seven
- b. Seven past four
- c. Four past seven
- d. Seven to four



- a. Five to five
- b. Five to four
- c. Five past five
- d. Five o'clock



- a. Three past two
- b. Two past three
- c. Two to three
- d. Ten past three



- a. A half past one
- b. A half past six
- c. Six past one
- d. One past six