


KG.3 Art Assessment

Part 1. Select the letter of the correct answer.


10

1. Which shape has 4 sides?


a.



b.



c.



2. What picture is it?



a. clock

b. cargo ship

c. car

3. How many colours does a rainbow have?

a. 5

b. 6

c. 7

4. What picture is it?



a. alarm clock

b. house

c. ship

5. Which of the following is a zigzag line?

a.



b.



c.



Part 2. Select the correct picture.

6.



helicopter



7.



lamp-shade



8.



house



9.



star shape



10.



triangle shape

