



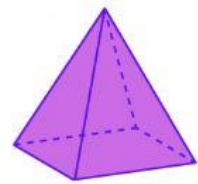
MATHEMATICS 3D SHAPES

Choose the solid that match the given characteristic.

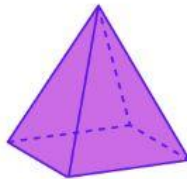

1. I have six faces
that are the
same.

☐☐☐


2. I have no flat
faces.

☐☐☐

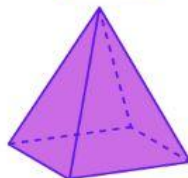
3. I have one point.

☐☐☐

4. I have 2 flat
faces.

☐☐☐

5. I have no
vertices.

☐☐☐

created by: Alicia Charles