















Math Exam

- Tell time: please choose the 2 correct ways to tell time

	<input type="text"/> <input type="text"/>		<input type="text"/> <input type="text"/>
	<input type="text"/> <input type="text"/>		<input type="text"/> <input type="text"/>
	<input type="text"/> <input type="text"/>		<input type="text"/> <input type="text"/>

● click on the right answer

			
<p>It's two past one It's two 'O' ten It's five past two It's two 'O' five</p>	<p>It's five past eight It's 25 past eight It's eight to five It's eight twenty-five</p>	<p>It's two past seven It's seven past two It's ten past seven It's seven ten</p>	<p>It's four past ten It's ten to four It's four fifty It's ten past four</p>
			
<p>It's quarter past eleven It's quarter to twelve It's eleven forty-five It's quarter past twelve</p>	<p>It's half past seven It's seven thirty It's seven six It's six past seven</p>	<p>It's two forty It's twenty past two It's twenty to three It's three past nine</p>	<p>It's three o'clock It's twelve o'clock It's three past twelve It's three</p>

● Elapsed time: write the elapsed time for the next hours

a) 8:00 am to 10:30am

b) 10:00am to 11:30am





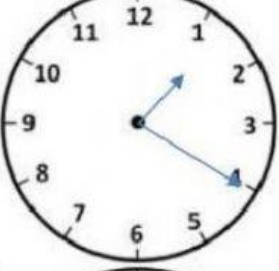
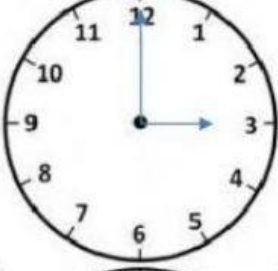




c) 2:32pm to 7:40pm

d) 4:00pm to 5:42pm

e) 1:40pm to 2:10pm

f) 4:32am to 11:12pm

Work out the elapsed time between the times on the two clocks.

	TO		___ hours ___ minutes
	TO		___ hours ___ minutes
	TO		___ hours ___ minutes
	TO		___ hours ___ minutes
	TO		___ hours ___ minutes