

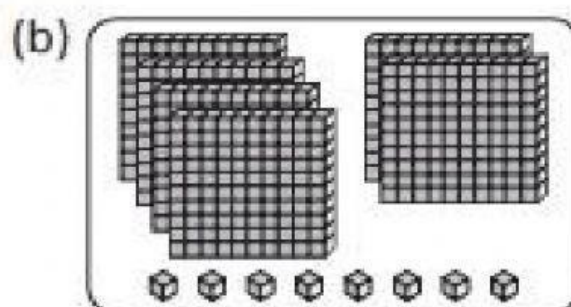
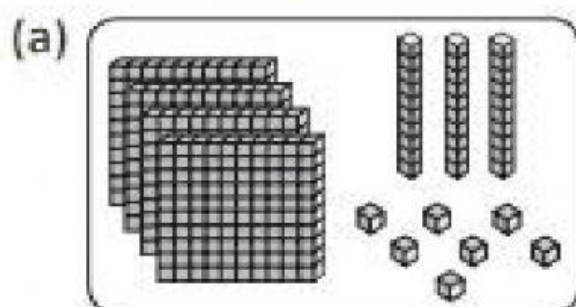


# 1



## Numbers to 1000

### Practice 1 Counting to 1000

1. How many are there?  
Write the numbers in the blanks.



2. Write the numbers in words.



3. Which cave is the train heading for?  
Complete the chart with the correct numbers.

train



(a) three hundred and thirteen	313	C
(b) six hundred and six		P
(c) five hundred and fifty-five		O
(d) nine hundred and twenty-four		H
(e) three hundred and six		W
(f) four hundred and fifty-eight		A
(g) one hundred and ninety-nine		E
(h) six hundred and sixty		R
(i) seven hundred and twelve		N
(j) three hundred and thirty		V
(k) eight hundred and seventy-two		Y
(l) two hundred and eighty-one		K
(m) five hundred and forty-three		S

Then, write the letters that match the numbers below.  
It is the

924	458	606	606	872

C			
313	458	330	199