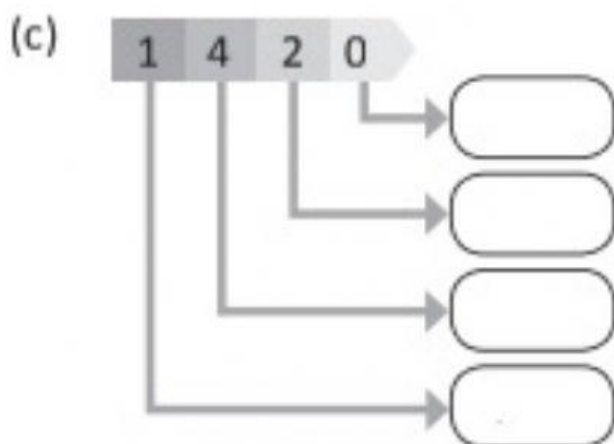
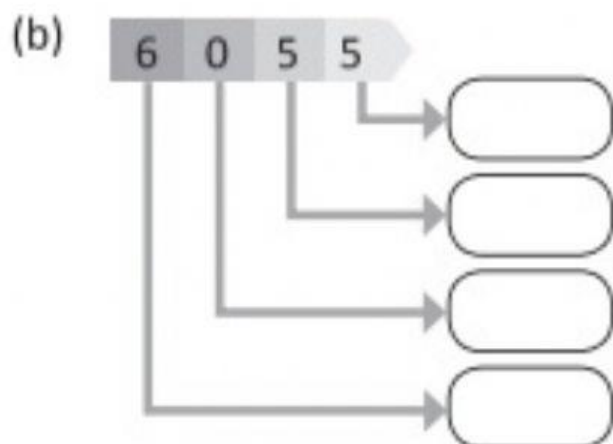
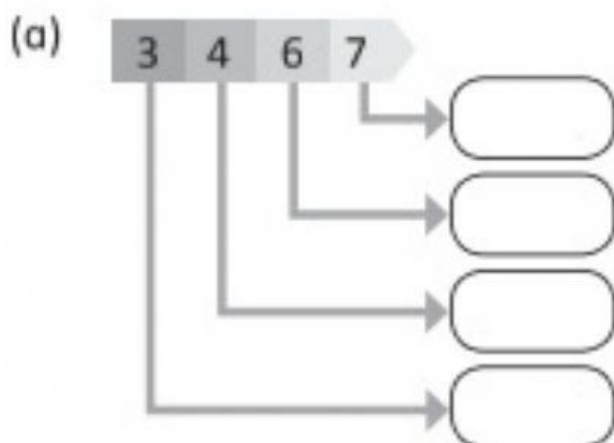
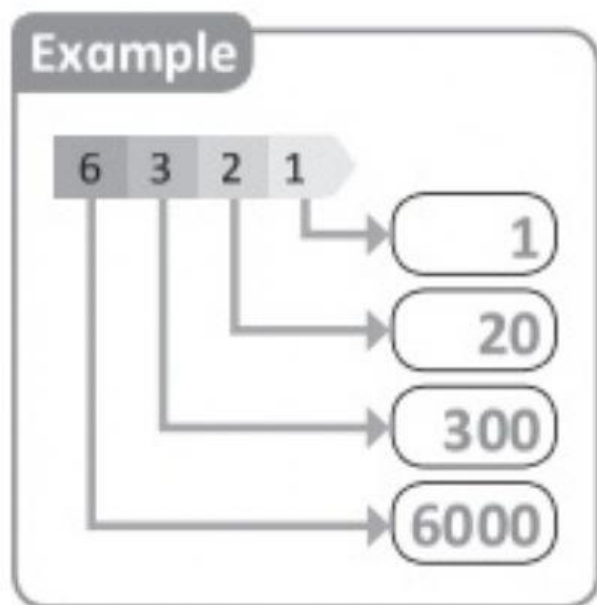


2. What does each digit stand for?



3. Fill in the blanks.

Thousands	Hundreds	Tens	Ones
7	5	4	8

(a) In 7548, the digit 4 is in the \_\_\_\_\_ place.

The value of the digit is \_\_\_\_\_.

(b) In 7548, the digit \_\_\_\_\_ is in the ones place.

The value of the digit is \_\_\_\_\_.

(c) In 7548, the value of the digit 7 is \_\_\_\_\_.

It is in the \_\_\_\_\_ place.