

Name:

Date:

## Revision

Choose the correct answer

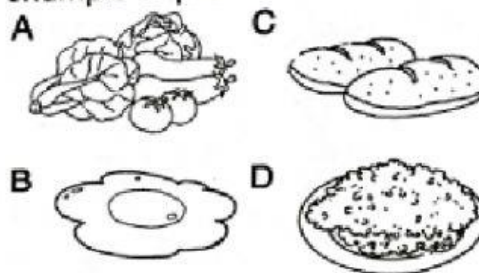
- 1 The diagram below shows a manipulative skill.



What is the manipulative skill shown above?

- A Handle specimens correctly and carefully
  - B Store science apparatus and substances correctly and safely
  - C Clean science apparatus correctly.
  - D Use and handle apparatus and science substances correctly
- 2 Which of the following cannot be done in the Science Room?
- A Listen to teacher's instructions
  - B Use equipment without the teacher's permission
  - C Wear safety goggles
  - D Clean up the sink when class is over

- 3 Which of the following is an example of proteins?



4

P: Stomach  
Q: Intestine  
R: Oesophagus  
S: Anus  
T: Mouth

Which of the following is the correct path of food flow during the digestion process?

- A R, T, S, Q, P
  - B T, R, P, S, Q
  - C T, R, P, Q, S
  - D P, Q, R, S, T
- 5 Which animal has similar food habits as the tiger?

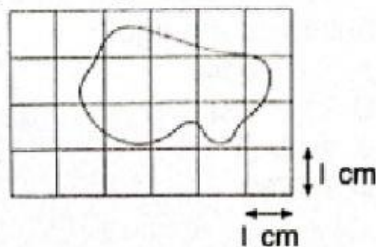
- A Crocodile
- B Monkey
- C Rabbit
- D Horse

- 6 The diagram below shows four types of plants.



Which plants reproduce through stem cutting?

- A P and Q      C Q and R  
B R and S      D Q and S
- 7 What is the unit used to measure the distance from Seremban to Gemas?
- A Litre  
B Kilometre  
C Square centimetre  
D Cubic metre
- 8 The diagram below shows an irregular shape.



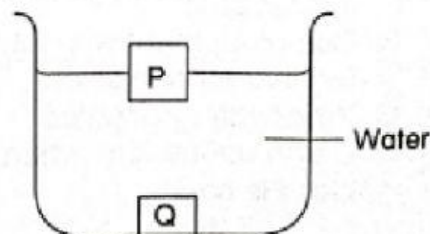
What is the area of the shape?

- A  $7 \text{ cm}^2$   
B  $8 \text{ cm}^2$   
C  $9 \text{ cm}^2$   
D  $10 \text{ cm}^2$
- 9 Which of the following is the wrong technique to measure the volume of liquids?
- A Hold the measuring cylinder when reading the measurement  
B Place the measuring cylinder on a flat surface  
C Eyes must be at the same level as the lowest part of the meniscus  
D Use a measuring cylinder or beaker

- 10 Which of the following is correct?

	Sinks	Floats
A	Plastic spoon	Mineral bottle
B	Paper clip	Coin
C	Flower	Key
D	Marble	Ping pong ball

- 11 The diagram below shows two cubes in water.



Which of the following is correct?

- A The density of P and Q is same
- B The density of Q is less than water
- C The density of P is higher than water
- D The density of Q is higher than water

12 Which of the following is an acid?

- A Salt
- B Baking powder
- C Pineapple
- D Honey

13 The information below is about the characteristics of a substance.

- Tastes bitter
- Changes red litmus paper to blue

What is the substance?

- A Lemon
- B Bitter melon
- C Mineral water
- D Vinegar

14 Arrange the planets from the longest to the shortest time they take to revolve around the Sun.

- A Earth, Mars, Venus, Mercury
- B Mars, Venus, Mercury, Earth
- C Venus, Mars, Earth, Mercury
- D Mars, Earth, Venus, Mercury

15 Which of the following uses a fixed pulley and a moveable pulley?

A



B



C



D

