


Name: _____

Date: _____

1 Complete.


- (a) The mass of the stack of papers is _____ kg.



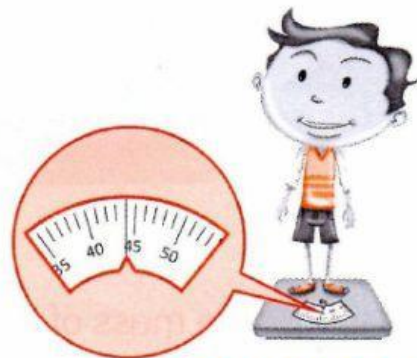
- (b) The mass of the book is _____ kg.



- (c) The mass of the cabbage is _____ kg.




- (d) The mass of the boy is _____ kg.




2 Complete with "more than" or "less than".

(a)



The mass of the crabs is
_____ 1 kg.

(b)



The mass of the apples is
_____ 1 kg.

3 Look at the list below.
Guess the mass of each item.
Then check your answer with a balance.
Tick (✓) the correct boxes.

Item	Guess		Check	
	less than 1 kg	more than 1 kg	less than 1 kg	more than 1 kg
my school bag with books				
my Pupil's Book				
my pencil case with stationery				

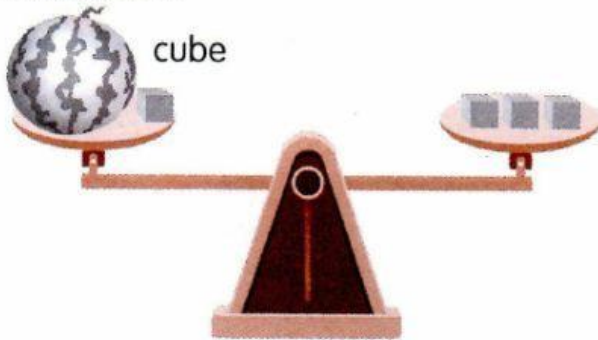
How do you use a balance
to check your answer?




4 Look at the picture.

watermelon

cube



watermelon



What is the mass of a cube?
Why do you say so?

How many
cubes have the
same mass as
the watermelon?

