

BUỔI 7: ÔN TẬP

Bài 1: Số?

$$\square + 4 = 28$$

$$24 - \square = 15$$

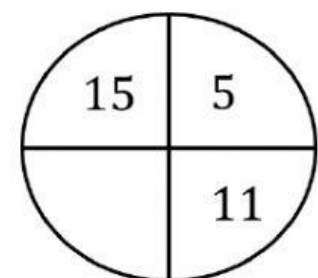
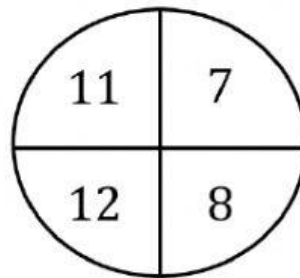
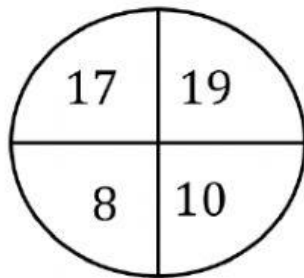
$$\square + 9 = 34$$

$$25 - \square = 20$$

$$\square + 9 = 44$$

$$34 - \square = 25$$

Bài 2: Số?



Bài 3: Tính

54	63	37	73	61
- 14	- 42	+ 12	- 52	- 41
_____	_____	_____	_____	_____
.....

71	34	66	79	94
- 40	+ 35	- 33	- 48	- 63
_____	_____	_____	_____	_____
.....