


Name: \_\_\_\_\_ Grade: \_\_\_\_\_ Date: \_\_\_\_\_



1. Add.

(a)



$$10 + 5 =$$

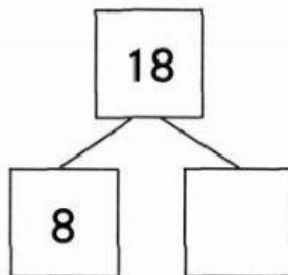
(b)



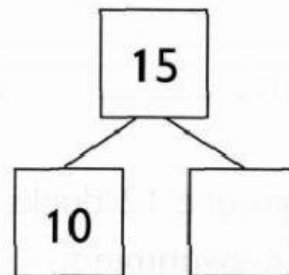
$$10 + 10 =$$

2. Fill in the missing numbers.

(a)



(b)




(c) 14 is \_\_\_\_\_ and 4.

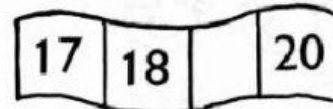
(d) 12 is 10 and \_\_\_\_\_.

Fill in the missing number.


(a)



(b)




(c)



(d)



3. Write two addition sentences and two subtraction sentences for the picture.




$$\boxed{8} + \boxed{6} = \boxed{\phantom{00}}$$

$$\boxed{14} - \boxed{8} = \boxed{\phantom{00}}$$


$$\boxed{\phantom{00}} + \boxed{\phantom{00}} = \boxed{\phantom{00}}$$

$$\boxed{\phantom{00}} - \boxed{\phantom{00}} = \boxed{\phantom{00}}$$

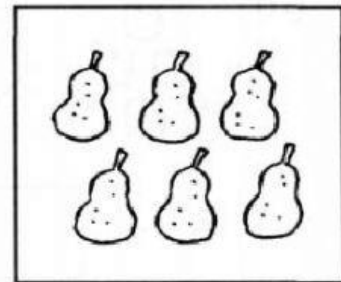
4. Fill in the blanks.



A



B

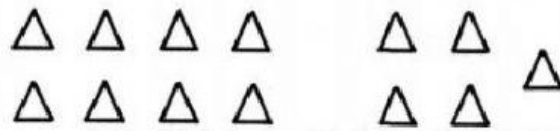


C

- (a) Set \_\_\_\_\_ has the greatest number of pears.  
(b) Set \_\_\_\_\_ has the smallest number of pears.

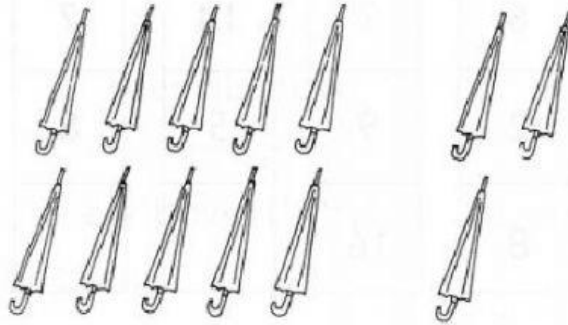
5. Add or subtract.

(a)



$$8 + 5 =$$

(b)



$$13 - 9 =$$

6. Fill in the correct answers.

$6 + 8 = \underline{\quad}$

$15 - 9 = \underline{\quad}$

$7 + 7 = \underline{\quad}$

$13 - 8 = \underline{\quad}$

$5 + 9 = \underline{\quad}$

$16 - 8 = \underline{\quad}$

$9 + 3 = \underline{\quad}$

$14 - 6 = \underline{\quad}$

$10 + 5 = \underline{\quad}$

$16 - 4 = \underline{\quad}$

7. David has 9 marbles. 7 marbles are red and the rest are blue.  
How many blue marbles does he have?

$$\square \bigcirc \square = \square$$

He has \_\_\_\_\_ blue marbles.

8. There are 15 pails. Mary takes away 4 pails.  
How many pails are left?

$$\square \bigcirc \square = \square$$

\_\_\_\_\_ pails are left.