

Nickname:

Quiz



Part 1: Match the time with the clock.



7:40



1:15

6:05



5:10



8:20



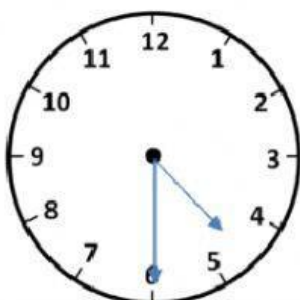
10:45

DO YOUR BEST

Part 2: Write the elapsed time on the space provided.



TO



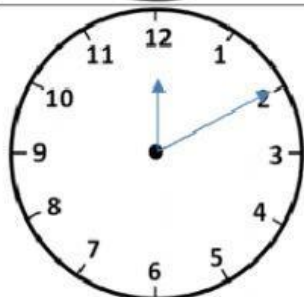
30 minutes



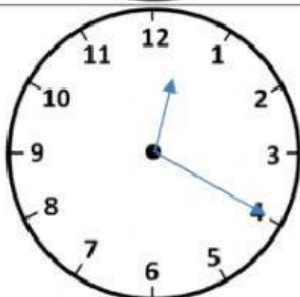
TO



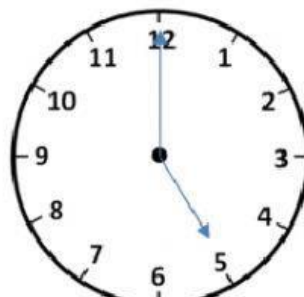
\_\_\_\_\_ minutes



TO



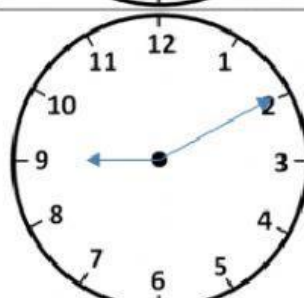
\_\_\_\_\_ minutes



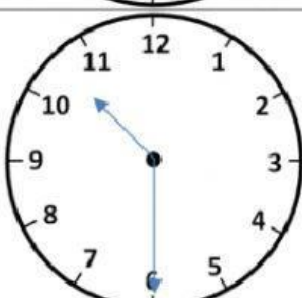
TO



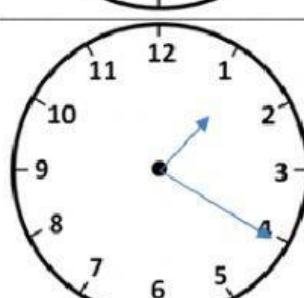
\_\_\_ hours \_\_\_ minutes



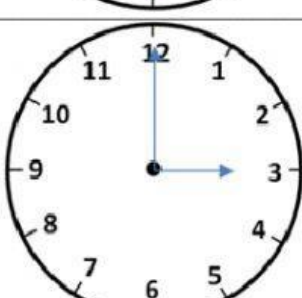
TO



\_\_\_ hours \_\_\_ minutes



TO



\_\_\_ hours \_\_\_ minutes

Part 3: Write the correct conversion for each given time.

4 hours =	240 minutes	300 minutes	180 minutes
240 minutes =	5 hours	4 hours 30 minutes	4 hours
360 minutes =	6 hours	8 hours	2 hours
7 hours =	410 minutes	420 hours	420 minutes
600 minutes =	10 minutes	10 hours	10 hours 10 minutes
11 hours =	642 minutes	665 minutes	660 minutes

YOU  
MADE IT!