




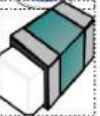




Name.....Surname.....Class P. 2/.....No.....

Date.....

Materials and their properties

Directions: Match column with the corresponding item in column B.
Draw lines to match column A in column B.











A		B	
1.	 <input type="radio"/>	Oa.	This object is soft. It is blue and made of fabric.
2.	 <input type="radio"/>	Ob.	It is blue and colour yellow and made of fabric.
3.	 <input type="radio"/>	Oc.	It is red and made of plastic.
4.	 <input type="radio"/>	Od.	It is a hard material and made of glass.
5.	 <input type="radio"/>	Oe.	It has a sphere shape, and it is made of wood.
6.	 <input type="radio"/>	Of.	It is red and grey and made of fabric.
7.	 <input type="radio"/>	Og.	It has a rectangle share, and it is made of rubber.
8.	 <input type="radio"/>	Oh.	It is a hard material and made of metal.

Direction: Write the following types of materials.

wood plastic fabric
 rubber metal glass









Example:



				
_____	_____	_____	_____	_____
				
_____	_____	_____	_____	_____

Direction: Write the following properties of materials.

Smooth rough heavy light rectangle
 soft hard small big sphere

Surface		Flexibility		Hardness	
					
_____	_____	_____	_____	_____	_____
Weight					
					
_____		_____			