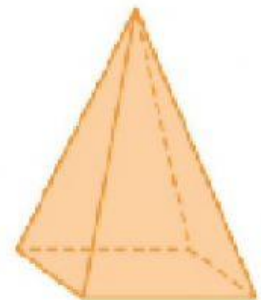

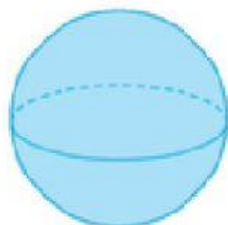
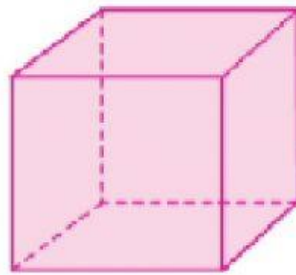
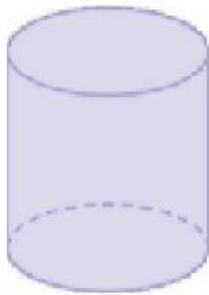


I SOLIDI

TRASCINA I NOMI DEI SOLIDI AL POSTO GIUSTO.



CILINDRO

CONO

SFERA

CUBO

PARALLELEPIPEDO

PIRAMIDE

QUESTI OGGETTI HANNO LA FORMA DI UN SOLIDO.
QUALE? SCEGLI LA RISPOSTA GIUSTA.

