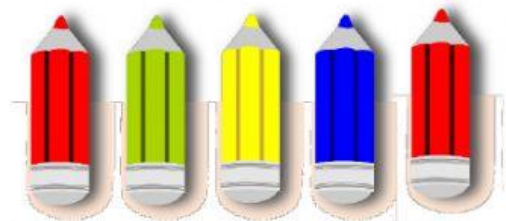


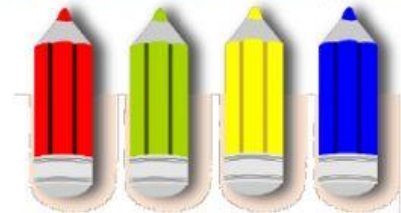
Subject	Unit	Lesson	Type of Sheet
Mathematics	26	1 & 2	Homework
Name:		Y 1 -	Date:

Q1: Count and type answer in the box.


a. How many red pencils are there?



b. How many green pencils are there?



c. How many blue pencils are there?



d. How many yellow pencils are there?




Q2: Favourite vegetables

a. How many carrots?

b. How many pumpkins?

c. How many egg plants?

d. How many broccolis?



e. Which is the most popular vegetable ?

f. Which is the least popular vegetable ?