

Viet Anh Primary School Name..... Nickname..... Class: 5A.....	REVISION 3 School year: 2020-2021 Grade: 5 Subject: English Time: 60 minutes	Supervisor 1
		Supervisor 2
Marks	Comment	

GE

Question 1: Find and match a word or a phrase in the box with a picture

headache	nervous	a fever
a skin rash	a sore throat	bad-tempered
confident	generous	lazy



1.....



2.....



3.....



4.....



5.....

Question 2: Look, read and fill in the blank.



0.He is tidy.

He always sweeps the yard.



1.She is strong.

She has lots of _____.



2.This is a _____ place.

We can't find it in the real life.



3. The dinosaur is _____.

We can't catch it.

Question 3: Read the text and choose the suitable word in each blank.

Hi! My name is Peter and I'm 8 years old. I live in Da Nang City and I love my city. There are many places to visit, so I never get bored in the city. Sometimes, my (1) **parents/ windows** tell me a lot of interesting things about Da Nang in the past, and I'm very excited.

You know? Da Nang now is quite (2). **different/ same** from the past.

A lot of big factories and high buildings have risen these days while there weren't in the (3) **past / present**. The streets (4) **before/ now** are full of modern vehicles like cars, buses, electric bikes and fashionable motorbikes. Many years ago, people just traveled on foot or by (5) **car/ bike** and cyclo. People in my city (7) **didn't have/ had** smart phones or TVs, they just talked to each other face to face or through a telephone, and (8) **updated/ update** news through radios. In the present time, we have all modern appliances to support every of our activity, so people are happier and (9) **healthier/ healthy** in my city.

Write T (True) or F (False)

0. Peter is 10 years old. **F**
1. Peter lives in Da Nang. **T**
2. His parents tell him a lot of things about Ho Chi Minh at present.
3. The city is the same as the past.
4. There were a lot of high buildings and big factories in the past.
5. People didn't have smart phones many years ago.
6. They updated news through smart phones.
7. People are not happier and healthier at present.

Question 4: Put a tick "v" if the senetence is correct.

1. What's the matter **with** you? You look a bit tired. v
2. The country is **more peaceful** than the city; so I want to live in the country.
3. Yesterday, I **walk** home because my bike was stolen.
4. I think football is very **interesting**.
5. **Although** she was nervous, she got the highest score.
6. My father is **more old** than my mother.

Question 5: Reorder the words to make meaningful sentences. (0.5 pt)

0. What / lunch / ? / would / have / for / you / -> **What would you have for lunch?**

1. didn't / the past. / cars / People / travel / by / in /

_____.

2. Heaven / is / more / than / magical / real life. /


_____.

QUESTION 6: Listen and fill in the blanks.

Example: 1. The boy has bread, a boiled egg and milk for breakfast.

2. The girl has _____ and yogurt as snacks in the afternoon.
3. Potato chips, hamburgers and pizzas are not good for your _____.
4. You should eat at least 5 pieces of fruit or vegetable _____.

QUESTION 2: Listen and match.



1. Alex _____

2. Joe _____

QUESTION 3: Listen and write (T) True or (F) False.

1. Her dream house is made of wood.
2. The house has 7 rooms.
3. The bedrooms are very small.
4. The house name is THE JABLES.
5. The garden's got a greenhouse.

MATHS

- 1) What digit is in the **Hundred thousands place** of **670 507**?
A. 3 B. 7 C. 5 D. 6
- 2) **What numbers are divisible by 2 and 5?**
A. 0-3 B. 5-10 C. 20-0 D. 7-51
- 3) What digit is in the **Hundreds place** of **801 123**?
A. 5 B. 2 C. 1 D. 7
- 4) **Multiplication: $90 \times 80 = 7\,200$** . What is **7 200** called?
A. sum B. product C. difference D. quotient
- 5) **What numbers are divisible by 3?**
A. 31 B. 32 C. 33 D. 37
- 6) **What number is divisible by 100?**
A. 120 B. 1 920 C. 9 000 D. All of them
- 7) In **327 263**, which place is the **digit 7** in?
A. Hundreds B. Thousands C. Ten thousands
- 8) Which number **goes after 999**?
A. 998 B. 100 C. 1 000
- 9) Which number **goes before 52 892**?
A. 52 893 B. 52 891 C. 60 000
- 10) Multiplication: **$30 \times 3 = 90$** . What are **90** called?
A. Total B. Product C. Quotient
- 11) What do you call the result you get when you multiply a number by itself?
A. A test of divisibility B. An even number C. Square number
- 12) What calculation is this? **$270 : 90 = 3$**
A. Addition B. Multiplication C. Division
- 13) Round the number to the **nearest thousand: $7\,694 \approx$ **
A. 7 600 B. 7 000 C. 8 000
- 14) Round the number to the **nearest ten thousand: $245\,780 \approx$ **
A. 250 000 B. 200 000 C. 240 000
- 15) What is the **total mass** of these animals below? _____



II/ LOOK AT THE NUMBER LINE ABOVE AND ANSWER QUESTIONS 16-20

_____ ; 350 730; 450 730; 550 730; 650 730; _____

16) Which number **goes after** 650 730?

- A. 700 000 B. 750 730 C. 650 731

17) Which number **goes before** 350 730?

- A. 150 700 B. 250 730 C. 250 930

18) Which numbers are **divisible by 10** ?

- A. 350 930; 650 930 B. None of them C. All of them

19) Which numbers are **divisible by 2**?

- A. 350 730 B. None of them C. All of them

20) Which is the **smallest** number in the number line?

- A. 650 730 B. 350 730 C. 550 730

III/ READ AND WRITE T (TRUE) OR F (FALSE)

21) Number 278 303 rounded to the nearest hundred, becomes 278 300. _____

22) Number 976 455 is divisible by 2. _____

23) 0; 1; 4; 49; 64 and 81 are SQUARE NUMBERS. _____

24) A number can be divided by 5 if the last digit is 0 or 5. _____

IV/ LOOK, READ AND MATCH.

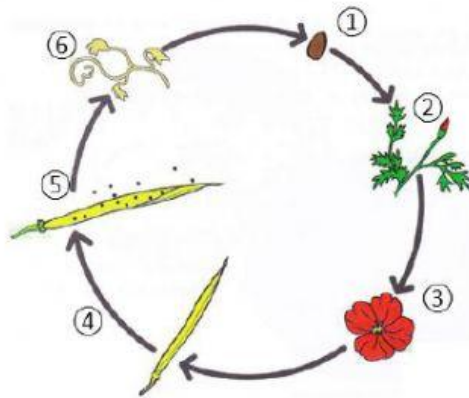
25) Which of the numbers are divisible by 2?

30	27	90	32	75	60	108
----	----	----	----	----	----	-----

26) Which of the numbers are divisible by 5?

SCIENCE

I/ Name the stages of a plant's life cycle.



II/ Choose the correct answer.

1. Seeds germinate when they have right conditions.

A. True

B. False

C. Both are correct

2. Part of a plant that can grow into a new plant.

A. shoot

B. seed

C. leave

3. To take in a substance means to “absorb”.

A. True

B. False

C. Both are correct

4. When a seed starts to grow, it germinates.

A. True

B. False

C. Both are correct

5. Part of a seed that grows into a new plant.

A. seed coat

B. food store

C. embryo

6. To become small and very dry means “to shrivel”

A. True

B. False

C. Both are correct

7. The outer cover that protects the seed.

- A. Seed coat B. leaf C. flower

8. Provide energy for germination

- A. light B. food store C. water

9. The process carried out by animals, wind, water and explosions is called seed dispersal.

- A. True B. False C. Both are correct

10. The process carried out by insects and wind is called pollination.

- A. True B. False C. Both are correct

11. The process happens when the male and female parts join is called fertilisation.

- A. True B. False C. Both are correct

12. Which substance do insects and wind move in pollination?

- A. eggs B. pollen C. nectar

13. The part of the flower forms the fruit is an ovary.

- A. True B. False C. Both are correct

14. The different stages in a plant's life from when it grows from a seed until it makes its own seeds are called a life cycle

- A. True B. False C. Both are correct

15. Everything around us is _____.

- A. conditions B. environment C. factors

16. When a seed starts to grow, it water and

A. swells/ absorbs

B. absorbs/ withers

C. absorbs/ swells

17. The is the first part of the new plant that starts to grow.

A. stem

B. seed

C. root

18. Seeds need water, and to germinate.

A. air/ light

B. warmth/ air

C. warmth/ light


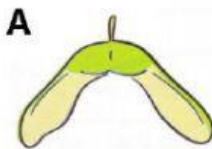
19. Light is a factor that plants need so that they can grow.

A. True

B. False

C. Both are correct

20. How are the seeds shown in the pictures spread?



A. A) by wind/ B) by water

B. A) by wind/ B) by explosion

C. A) by wind/ B) by animals

21. Pollination brings pollen from the to the of the same kind of flower.

A. stamen/ anther

B. stigma/ stamen

C. stamen/ stigma

22. Bees, butterflies, beetles are called that pollinate flowers.

A. pollinators

B. pollination

C. pollen

23. The stage that the flower produces fruit

A. Growth

B. Seed germination

C. Seed production

24. A isn't dispersed by water. True or False?

True

False