








Date: \_\_\_\_\_

Name: \_\_\_\_\_

**QUESTIONNAIRE FIRST  
PARCIAL SIXTH COURSE**



**1. WRITE THE LETTER ACCORDING THE PICTURES.**

| <b>1 things</b> |   |   | <b>2 made of</b> |
|-----------------|---|---|------------------|
| 1               |    |  | a wood           |
| 2               |    | _____   | b plastic        |
| 3               |    | _____   | c glass          |
| 4               |   | _____   | d wool           |
| 5               |  | _____   | e metal          |
| 6               |  | _____   | f paper          |

**2. COMPLETE THE SENTENCES WITH PARTICLE VERBS (PASSIVE VOICES).**

- a) The tree trunks are \_\_\_\_\_ (cut) into short logs.
- b) The bark of the logs is \_\_\_\_\_ (remove)
- c) The logs are \_\_\_\_\_ (make) into pulp.
- d) Chemicals are \_\_\_\_\_ (add) to the pulp.
- e) The sheet of paper is \_\_\_\_\_ (form)
- f) The sheets of paper are \_\_\_\_\_ (press).

### 3. IDENTIFY WHAT IS THE MATERIALS.

metal

plastic

glass

wood

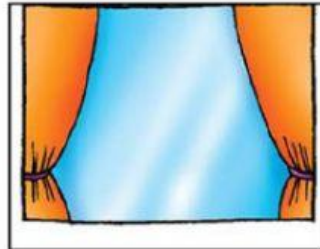
paper

wool


1



2



3



1) \_\_\_\_\_

3) \_\_\_\_\_

2) \_\_\_\_\_

4



5



6



4) \_\_\_\_\_

6) \_\_\_\_\_


5) \_\_\_\_\_

### 4. LABEL THE PROCESS OF POLLINATION WITH THE WORDS IN THE BOX.

deposit

pick up

carry












1) \_\_\_\_\_

3) \_\_\_\_\_

2) \_\_\_\_\_

**5. MAKE A CIRCLE IF EACH PICTURE IS A SOLID, LIQUID, GAS.**

|  | <u>S</u> olid  | <u>L</u> iquid  | <u>G</u> as  |
|--|---|---|---|
| water     | <input type="text" value="solid"/>  | <input type="text" value="liquid"/>   | <input type="text" value="gas"/>  |
| house     | <input type="text" value="solid"/>  | <input type="text" value="liquid"/>   | <input type="text" value="gas"/>  |
| fog      | <input type="text" value="solid"/>  | <input type="text" value="liquid"/>   | <input type="text" value="gas"/>  |
| juice   | <input type="text" value="solid"/>  | <input type="text" value="liquid"/>   | <input type="text" value="gas"/>  |
| tree    | <input type="text" value="solid"/>  | <input type="text" value="liquid"/>   | <input type="text" value="gas"/>  |
| coffee  | <input type="text" value="solid"/>  | <input type="text" value="liquid"/>   | <input type="text" value="gas"/>  |


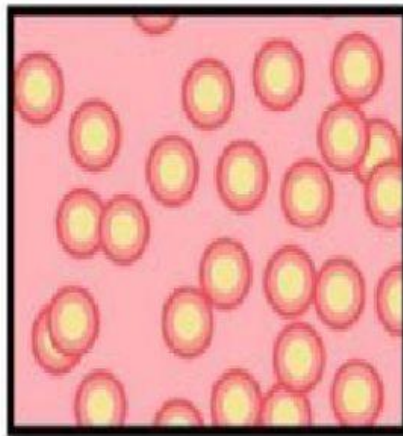

**6. FILL BANK USING WORDS OF THE BOXE.**

WATER—SHAPE—PARTICLES—SHAPE—ICE—  
GASES



In solids, the \_\_\_\_\_ are close together.  
Liquids, like \_\_\_\_\_, can change their shape.  
Gases don't have a fixed \_\_\_\_\_.  
Solids, like \_\_\_\_, usually have a fixed form.  
Gases can change their \_\_\_\_\_.  
The particles in \_\_\_\_\_ can move around freely.

**7. WRITE THE NAME FOR STATES OF MATTER UNDER THE CORRECT PICTURE.**



**8. CLASSIFY THE WORDS BELOW.**

water      pen      desk      juice      air      milk  
 glass      book      coat      soda      chips

| solids      | liquids | gases |
|-------------|---------|-------|
| <i>desk</i> |         |       |
|             |         |       |
|             |         |       |
|             |         |       |
|             |         |       |
|             |         |       |

**9. WRITE TRUE AND FALSE ACCORDING TO THE INFORMATION.**

- 1) QUITO IS THE CAPITAL OF ECUADOR \_\_\_\_\_
- 2) CURRENCY OF ECUADOR IS THE PESO \_\_\_\_\_
- 3) LA PAZ IS THE CAPITAL OF PERU \_\_\_\_\_
- 4) CHILE IS THE CAPITAL OF PERU \_\_\_\_\_
- 5) CURRENCY OF COLOMBIA IS COLOMBIAN PESOS \_\_\_\_\_

**10. READ THE TEXT AND COMPLETE THE TABLE.**

### VENEZUELA

Venezuela is bordered on the north by the Caribbean Sea, on the south by Brazil, on the west by Colombia and on the east by Guyana. The capital of Venezuela is Caracas and its currency is the bolivar. Spanish is spoken in this country.

### BRAZIL

Brazil is bordered on the north by the Atlantic Ocean, Colombia and Venezuela, on the west by Peru, Bolivia, Paraguay and Argentina; on the south by Uruguay and on the east by the Atlantic Ocean. The capital of Brazil is Brasilia. Its currency is the real. Portuguese is spoken in this country.

| country            | capital                       | currency                      | language                      |
|--------------------|-------------------------------|-------------------------------|-------------------------------|
| <u>Venezuela</u> 1 | <u>                    </u> 2 | <u>                    </u> 3 | <u>                    </u> 4 |
| <u>Brazil</u> 5    | <u>Brasilia</u> 6             | <u>                    </u> 7 | <u>                    </u> 8 |