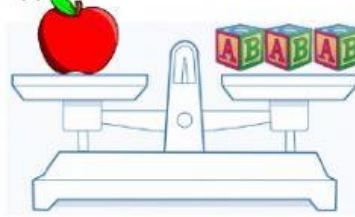


Look at the pictures and answer the questions.

lemon



apple



banana



cabbage



- a) How much does the lemon weigh? blocks
- b) How much does the apple weigh? blocks
- c) How much does the banana weigh? blocks
- d) How much does the cabbage weigh? blocks
- e) Which is the **heaviest**?
- f) Which is the **lightest**?
- g) The apple is the lemon.
- h) The lemon is the cabbage.
- i) The cabbage is the banana.
- j) Arrange from **heaviest** to **lightest**.



Heaviest



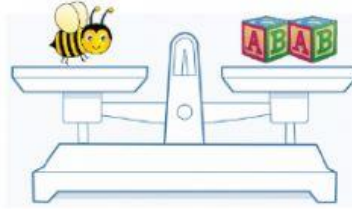
lightest

Look at the pictures and answer the questions.

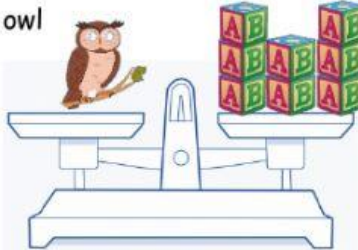
snail



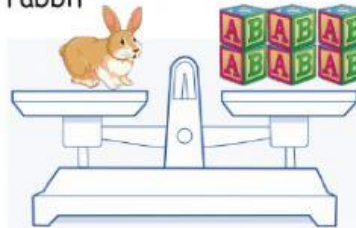
bee



owl



rabbit



- a) How much does the snail weigh? blocks
- b) How much does the bee weigh? blocks
- c) How much does the owl weigh? blocks
- d) How much does the rabbit weigh? blocks
- e) Which is the **heaviest**?
- f) Which is the **lightest**?
- g) The snail is the bee.
- h) The bee is the owl.
- i) The owl is the rabbit.
- j) Arrange from **heaviest** to **lightest**.



Heaviest



lightest