

SCIENCE 2 – SEMESTER I

CIRCLE THE CORRECT ANSWER.

1. When can we fly a kite?

- A. windy B. snowy C. frosty D. rainy

2. What is NOT the extreme weather?

- A. hurricanes B. rain C. tornadoes D. heavy snow

3. The beach is covered with....




- A. litter B. turtles C. crabs D. bottles

4. What should we wear on a sunny day?


- A. raincoat B. boots C. scarf D. hat

5. What is the weather like?



- A. wind B. sunny C. rain D. sunshine

6. What is the weather like?



- A. windy B. sunny C. rainy D. snowy

7. We with our eyes.

- A. see B. sight C. smell

8. What should we do during the storm?

- A. play outside B. climb a tree C. stay inside the house D. fly a kite

9. What can we see when it rains and the Sun is shining at the same time?

- A. snow B. rainbow C. the Moon




10. When we put on a swimsuit and go swimming?

- A. snowy B. rainy C. sunny D. hail

11. This is a wet place. Choose T (True) / F (False)



12. A..... is a place where rocks are dug from the ground.



- A. worry B. quarry C. sorry D. story

13. Granite is

- A. light B. smooth C. very strong D. soft

14. What is NOT a minibeast?

- A. worm B. spider C. crocodile

15. What do animals need to live most?

- A. water, light B. water, food C. snow, light

16. What animals cannot live in many environments?

- A. penguin B. mouse C. human

17. Which animals usually live in the wet place?

- A. dogs B. lions C. frogs D. tigers

18. Which animal cannot live in the dry place?

- A. fish B. lion C. eagle D. goat

19. Which environment do the fish live?

- A. desert B. ocean C. on the mountain

20. What are diamonds used for?

- A. building B. jewellery C. making clothes

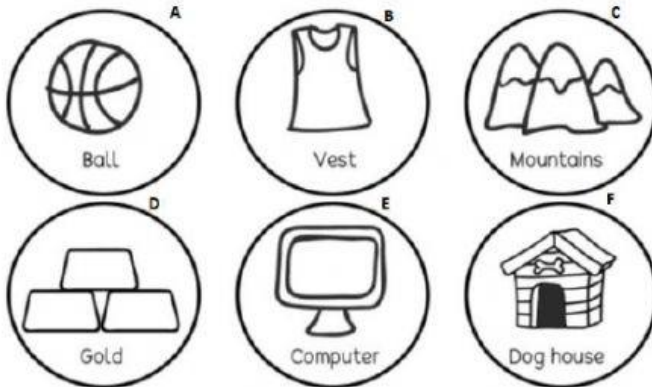
21. What is granite used for?

- A. building B. jewellery C. making clothes

22. What is soil used for?

- A. growing plants B. building a house C. making a sandcastle

23. Which pictures are natural resources?

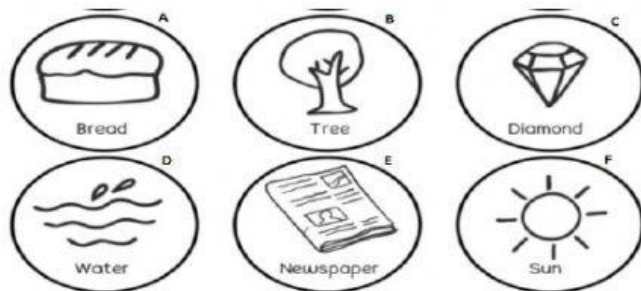


Pictures F, B, E

Pictures D, C

Pictures A, E, F

24. Which pictures are man-made?



Pictures C and D

Pictures F, D, B

Pictures A, E


25. What can you see in soil?

- A. rocks, living things B. a dog C. a diamond

26. A phone is man - made or natural materials?

- A. natural materials B. man- made

27. What does wood come from?



- A. a diamond B. wool C. a tree

28. Which one is sewage?



A



B



C

29. Who tells us what the weather will be like?

- A. dentists B. police officers C. weather forecasters

30. What is this?



- A. slate B. diamond C. quartz

31. What is this?



- A. marble B. diamond C. quartz

32. This rock is made of.....



- A. granite B. sandstone C. limestone

33. This sea arch is made from



- A. rocks B. sandstone C. limestone

34. has rocks in it.



- A. Slate B. Diamond C. Soil

35. Granite is very strong. It is often used in

- A. buildings B. clocks C. roof tiles