

Subject: Mathematics

Ay/Term 2nd Term, AY 2021 Score: _____

Topic: Parallel and transversal lines

Worksheet No. _____ Date: _____

Student name: _____ Class: _____ Student No. _____



Parallel and transversal line



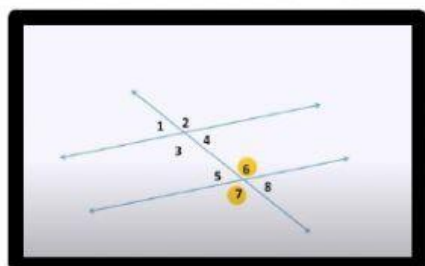
Parallel and transversal line. Name the angles of the lines

Vertical

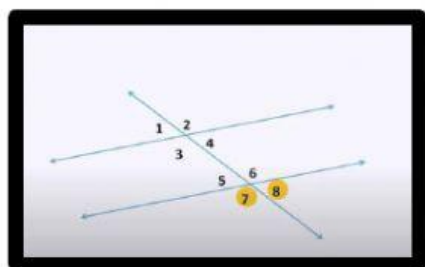
Adjacent

Exterior

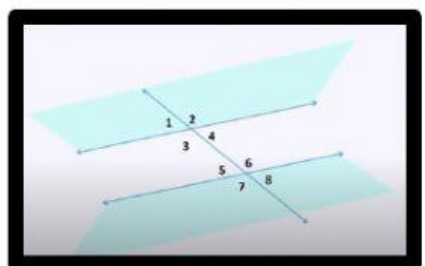
Interior



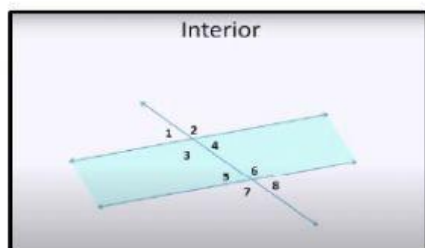
1. _____ angles



2. _____ angles



3. _____ angles



4. _____ angles