


Cherreen has two ribbons.

The first is 11 cm long.

The second is 8 cm long.

What is the total length of the ribbons?

$$\square \bigcirc \square = \square$$




Hugo sees a worm that is 16 cm long.

He sees a second worm that is 7 cm shorter.

How long is the second worm?

$$\square \bigcirc \square = \square$$




Jin-jin has a green pencil that is 5 cm long.

She has a red pencil that is 6 cm longer.

How long is the red pencil?

$$\square \bigcirc \square = \square$$



Preme has two rocks.

The first is 7 cm long.

The second is 12 cm long.

How much longer is the second rock?

$$\square \bigcirc \square = \square$$




Austin sees a stop sign that is 2 m tall.
He sees a traffic light that is 1 m taller.
How tall is the traffic light?




$$\square \bigcirc \square = \square$$

Phum is at the zoo.
He sees a giraffe that is 3 m tall.
He sees a tree that is 7 m tall.
How much taller is the tree?



$$\square \bigcirc \square = \square$$

Erk sees a pink flower that is 11 cm tall.
She sees a blue flower that is 17 cm tall.
How much shorter is the pink flower?



$$\square \bigcirc \square = \square$$