

Wills Strathmore Stevens
Science End of Term Assessment
Grade Two

Name: _____

Select the correct answer.




1. Circle the instrument used for measuring rainfall

- a.  wind sock b.  rain guage c.  thermometer

2. Which of these instruments gives the wind direction?

- a. wind pipe  b. wind mill  c. wind vane 







3. We use a _____ to say how hot or cold the weather is

- a. barometer  b. water meter  c. thermometer 

4. Where can weather instruments be found?





- a. at the hospital b. in the shop c. at the airport

Match each simple machine to its name.

	Wheel and axel
	Inclined plain
	screw
	pulley
	lever
	wedge

Complete the sentences with the actions in the box.

See touch smell taste hear

- I can _____ with my 
- I can _____ with my 
- I can _____ with my 
- I can _____ with my 
- I can _____ with my 