



El Shaddai Home Schools
End of Term Assessment
2021-2022
Mathematics

Name: _____

Date: _____

Kinder: 2








Type the numeral that tells how much.

1)  = 

2)  = 

3)  = 

4)  = 

5)  = 



6) Click the apple that different.



7) Click the bird that is under the tree.



8) Click only 3 hats.






11 – 13

Match the shapes to their names.

a)



rectangle

b)



triangle

b)



circle

c)



square





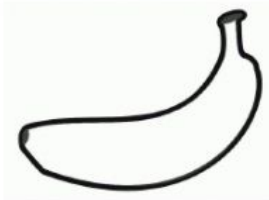
9) Click the athlete that is in 1st place.



10) Click the animal that is in 3rd place.



11) Click the fruit that is in 4th place.

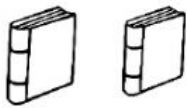





12) Match the set that is showing five to the numeral 5.



5



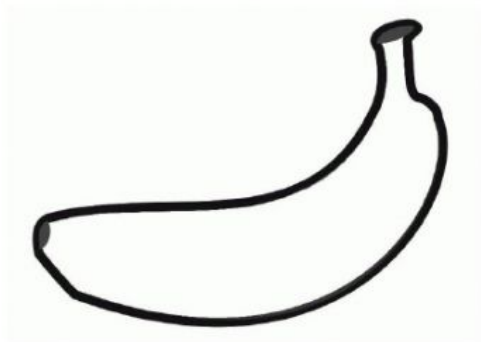
13) Click the numeral 4.

b



p

14) Which one is big?





15) Which one is small?



End of Assessment 😊