


Let's help zoologist Zane and Maestro keep track of how many insects each bird eats. Answer the questions below.




If 2 birds must eat 5 bugs each, how many bugs will they eat together?




_____ X _____ = _____

If 3 birds must eat 4 bugs each, how many bugs will they eat together?



_____ X _____ = _____

If 5 birds must eat 3 bugs each, how many bugs will they eat together?



_____ X _____ = _____

If each bird has 2 legs, how many legs do all the birds have together?



_____ X _____ = _____