


Let's help zoologist Zane and Maestro keep track of how many materials the birds use to build their nests. Answer the questions below.

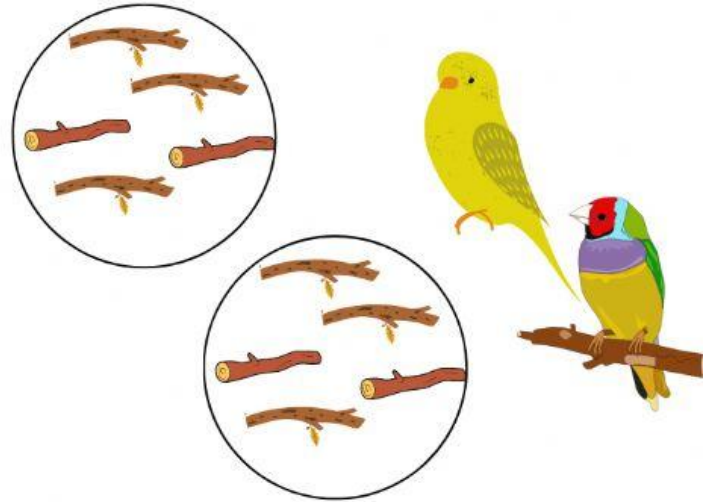


If 3 birds used 4 leaves each, how many leaves did they use altogether?




$$\underline{\quad\quad} \times \underline{\quad\quad} = \underline{\quad\quad}$$

If 2 birds used 5 sticks each how many sticks did they use altogether?



$$\underline{\quad\quad} \times \underline{\quad\quad} = \underline{\quad\quad}$$

If 4 birds used 3 blades of grass, how many blades of grass did they use together?



$$\underline{\quad\quad} \times \underline{\quad\quad} = \underline{\quad\quad}$$

If each bird has 2 wings each how many wings do all the birds have together?



$$\underline{\quad\quad} \times \underline{\quad\quad} = \underline{\quad\quad}$$