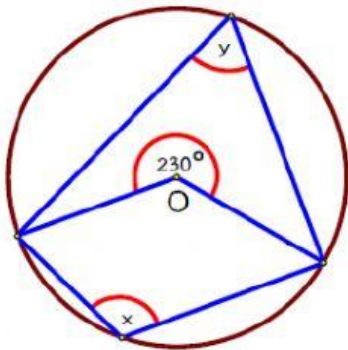


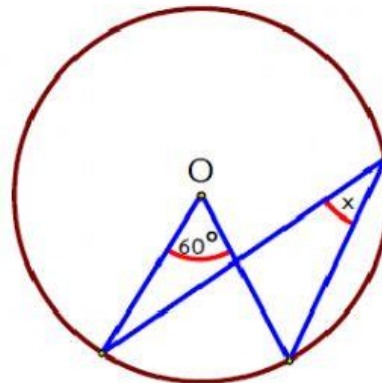
1. จากรูปที่กำหนดให้ในแต่ละข้อต่อไปนี้ จงหาค่า x , y , a , และ b โดยกำหนดให้ O เป็นจุด ศูนย์กลางของวงกลม

1.1



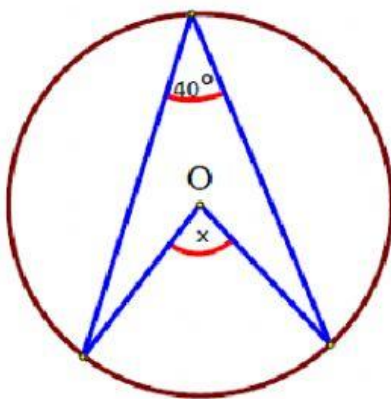
$x = \dots\dots\dots$, $y = \dots\dots\dots$

1.2



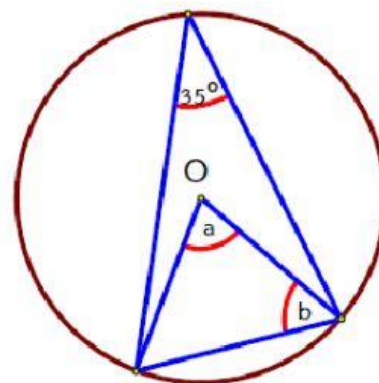
$x = \dots\dots\dots$

1.3



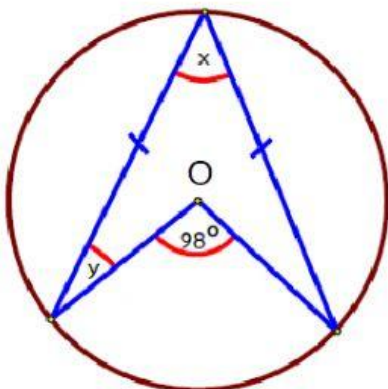
$x = \dots\dots\dots$

1.4



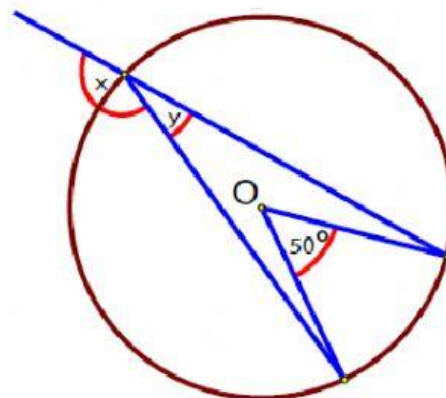
$a = \dots\dots\dots$, $b = \dots\dots\dots$

1.5



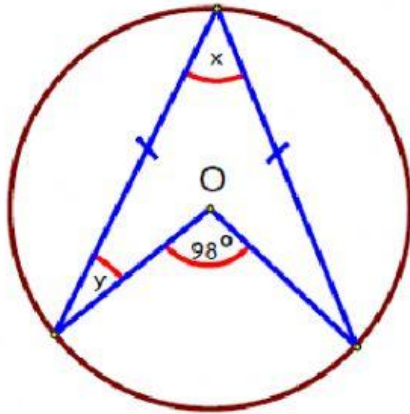
$x = \dots\dots\dots$, $y = \dots\dots\dots$

1.6



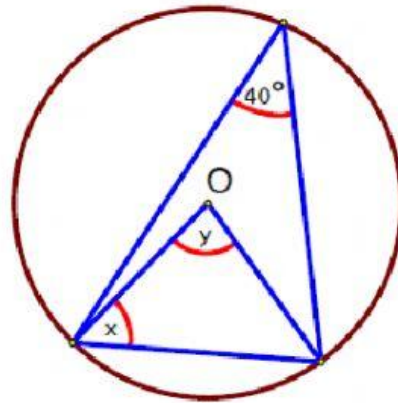
$x = \dots\dots\dots$, $y = \dots\dots\dots$

1.7



$x = \dots\dots\dots$, $y = \dots\dots\dots$

1.8



$x = \dots\dots\dots$, $y = \dots\dots\dots$