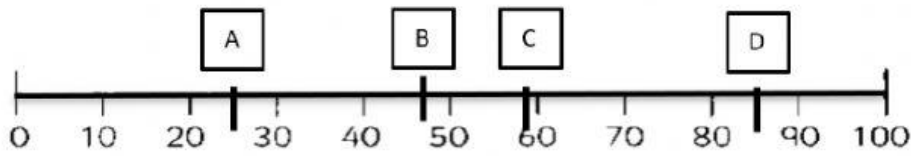



## ĐỀ CƯƠNG ÔN TẬP MÔN MATHS – 2A5

Question 1 : where is number 85 ?



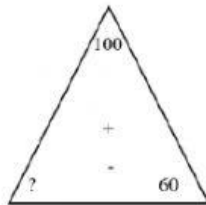
- a. A                      b. B                      c. C                      d. D

Question 2. 3. The  card is number pairs to 20.



- a. 7                      b. 8                      c. 20                      d. 13

Question 3 : Find the missing number in the triangle.



- a. 30                      b. 40                      c. 50

Question 4: Find number pair of 20 :

- a.  $19 + 2$                       b.  $19 + 1$                       c.  $19 + 3$

Question 5 : Find the midpoint number :

10 11 12 13 14 15 16 17 18 19 20

- a. 10                      b. 15                      c. 20

Question 6 : What number is it ? **20**

- a. Ten                      b. twelve                      c. twenty

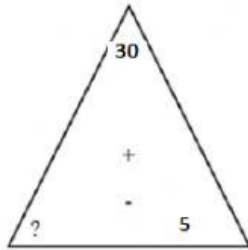
Question 7 : Which number is Less than 75 and More than 60 ?

- a. 65                      b.80                      c. 90

Question 8 : Find number pairs of 30 :

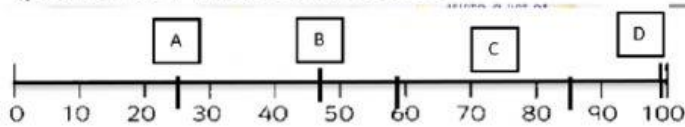
- a.  $20 + 3$                       b.  $10 + 10$                       c.  $20 + 10$

Question 9 : Find the missing number :




- a. 20            b. 15            c. 25

Question 10 : Where is number 99 ?



- a. A            b. B            c. C            d. D

Question 11 : How many dots are there ?



- a. 25            b. 24            c. 23

Question 12 : What is the next number ?

**12 , 14 , 16 , 18 , ..... 22 , ..... 26**

- a. 12, 14, 16, 18, 20, 22, 24, 26  
b. 12, 14, 16, 18, 19, 22, 23, 26  
c. 12, 14, 16, 18, 20, 22, 25, 26

Question 13 : What is the midpoint number ?

**20, 21, 22, 23, 24, 25, 26, 27, 28, 29, 30**

- a. 20            b. 25            c. 29

Question 14 : Find the equal of:  $15 + 5 =$

- A.  $10 + 5$             B.  $5 + 20$             C.  $10 + 10$

Question 15 : What is **17** rounded to the nearest 10?

- a. 15                      b. 10                      c. 20


Question 16 : What is **89** rounded to the nearest 10?

- a. 80                      b. 90                      c. 100

Question 17 : What shape is in the box ?



- A. Circle                      B. Rectangle                      C. Square

Question 18 : What shape is it ? 

- A. Circle                      B. Rectangle                      C. Square

Question 19 : : Find the equal of : **25 + 5 =**

- a. 20 + 5      b. 30 + 0      c. 10 + 10

Question 20 : Find the equal of : **12 + 8 =**

- a. 12 + 5      b. 10 + 10      c. 13 + 4