

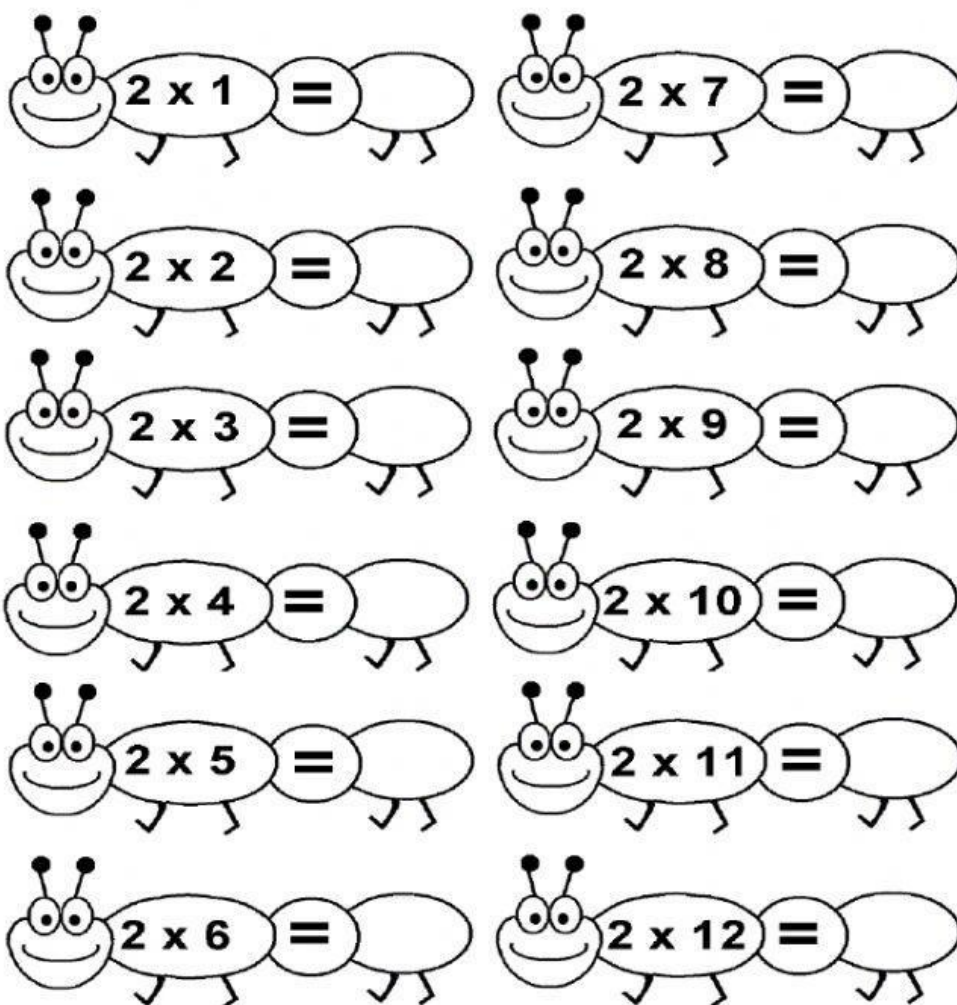
# MATHEMATICS TEST 3

## PRIMARY 2

TUESDAY (7/12/21)


NAME:

1. Complete the multiplication facts below.



2. Write a number sentence to show how many cubes are in one stack.


20 cubes altogether



stacks

÷  =


30 cubes altogether



stacks

÷  =


25 cubes altogether



stacks

÷  =


10 cubes altogether



stacks

÷  =


35 cubes altogether



stacks

÷  =

40 cubes altogether



stacks

÷  =

3. Jenny got 23 presents for her birthday. Then, her grandmother came and gave 17 more presents. How many presents did she have in total?

○  ○

4. Alex baked 44 cupcakes on Monday and 21 cupcakes on Tuesday. How many cupcakes did he bake altogether?

<input type="text"/>	<input type="text"/>	<input type="text"/>	<input type="text"/>	<input type="text"/>
----------------------	----------------------	----------------------	----------------------	----------------------

5. Peter had 29 pieces of chocolate. He gave away 11 of them. How many chocolates were left with him?

<input type="text"/>	<input type="text"/>	<input type="text"/>	<input type="text"/>	<input type="text"/>
----------------------	----------------------	----------------------	----------------------	----------------------

6. Sally baked 37 cookies. 13 of them were burnt. How many good cookies were left?

<input type="text"/>	<input type="text"/>	<input type="text"/>	<input type="text"/>	<input type="text"/>
----------------------	----------------------	----------------------	----------------------	----------------------

7. Josh picked 23 flowers and his brother picked 15 flowers. 14 of them wilted on their way home. How many of them are still fresh?

<input type="text"/>	<input type="text"/>	<input type="text"/>	<input type="text"/>	<input type="text"/>
<input type="text"/>	<input type="text"/>	<input type="text"/>	<input type="text"/>	<input type="text"/>

8. Sally had 49 pages of homework to complete. She did 17 pages already. How many pages did she have left?

<input type="text"/>	<input type="text"/>	<input type="text"/>	<input type="text"/>	<input type="text"/>
----------------------	----------------------	----------------------	----------------------	----------------------